



Royal College - Colombo 07

රාජකීය විද්‍යාලය - කොළඹ 07

Grade 9 – Third Term Test – November 2019

තෙවන වාර පරීක්ෂණය - 2019 නොවැ. - 9 ශ්‍රේණිය

කාලය : පැය 2  
Time : 2 hours

Geography – I

භූගෝල විද්‍යාව – I

61 E I

Name :- ..... Grade : -..... Index number:-.....

Answer all questions

❖ Select and underline the correct answer for question number 1 - 5.

- Monsoon is a specific type of winds that blow during a definite time period of a year across the land. The type of rain received by Sri Lanka from May to September is,
 

(1) The South west monsoon	(2) The North east monsoon
(3) The second inter monsoon	(4) The first inter monsoon
- In the Asian region, different human races as well as many ethnic groups live according to various climatic conditions. The countries where the Caucasoid human race living are,
 

(1) India and Japan	(2) Sri Lanka and Pakistan
(3) Sri Lanka and Korea	(4) Singapore and Arabic countries
- The major characteristics of the drainage in Asia is the large number of rivers scattered all over the region. Accordingly the rivers that flow into Aral Sea are,
 

(1) Euphrates and Tigris	(2) Ob and Lena
(3) Serdaria and Amudaria	(4) Ural and Indus
- The physical features created due to the sediments brought by rivers are deposited as sand banks and blocking the estuaries overflowing of rivers is,
 

(1) Lagoons	(2) Delta
(3) Sand dunes	(4) Marshes
- Two rivers that flow to the sea from western province are,
 

(1) River Menik and river Kelani	(2) River Kelani and river Kalu
(3) River Nilwala and river Walawe	(4) River Kelani and river Walawe

■ State whether the following statements are true (✓) or False (X).

6. Philippine islands are islands that belong to the Asian continent which are larger in extent. (.....)
7. The Asian continent covers an area of 44.6 million km<sup>2</sup> and it is about 38% of the total land area of the Earth. (.....)
8. As 'Tibet' is the highest plateau in the world and spread over a very large land area, it is called 'Rooftop of the world' (.....)
9. Euphrates and Tigris can be named as the rivers that flow into the Persian bay. (.....)
10. Leaves are in a shape of needles. Pine, spruce fir and oak trees are grown in Deciduous forests. (.....)

■ Find the correct answer and fill in the blanks.


( Coastal , Central hills , residual , intermediate , Arabian , Pakistan )

River Indus flows across present (11) ..... and India and falls into the (12) ..... sea close to the city of Karachchi.


The relief zone up to 30 m from the sea level is called (13) ..... plain and the zone from 30 m – 300 m is called as the (14) ..... plain.

(15) ..... hills are the remains of hard mountains which had been subjected to erosion.

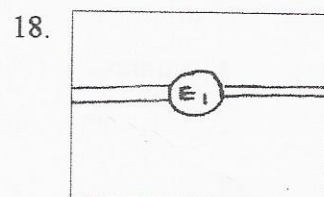
■ Name the following relief features and conventional signs.



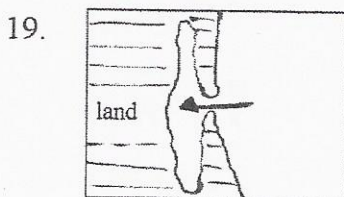
.....



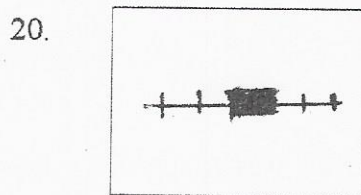
.....



.....



.....



.....

(2 x 20 = 40 marks)



**Royal College - Colombo 07**

රාජකීය විද්‍යාලය - කොළඹ 07

**Grade 9 - Third Term Test - November 2019**

තෙවන වාර පරීක්ෂණය - 2019 නොවැ. - 9 ශ්‍රේණිය

**Geography - II**

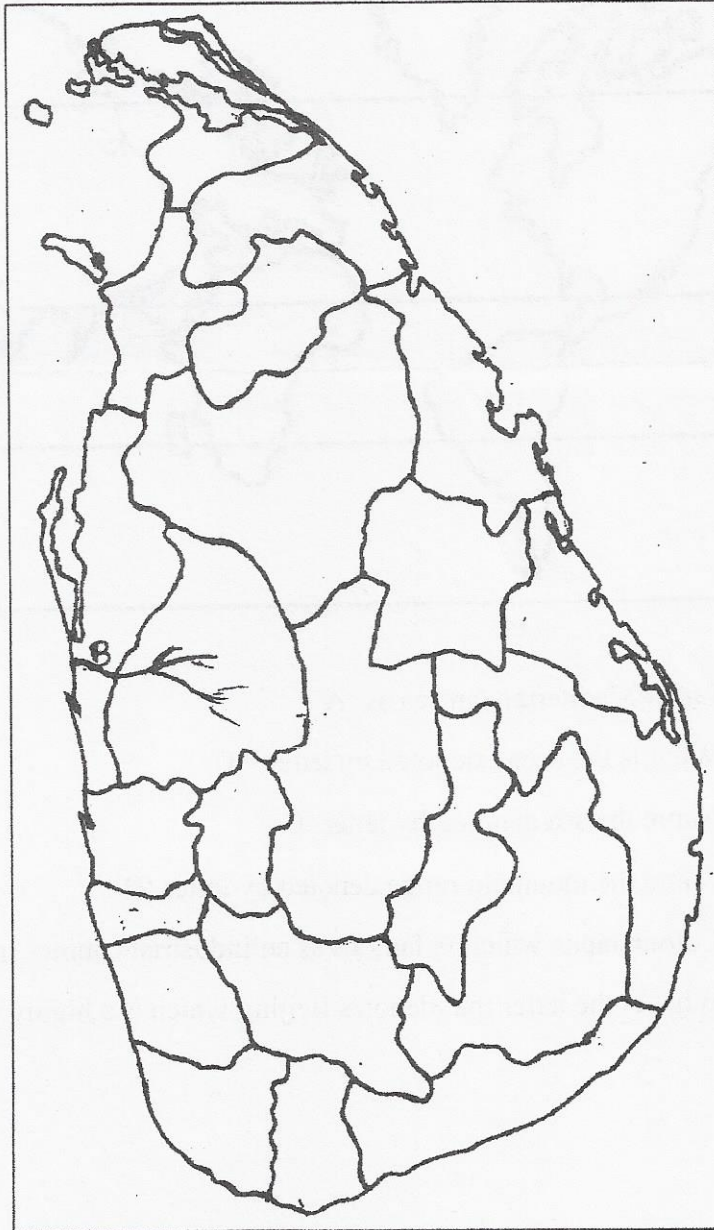
**භූගෝල විද්‍යාව - II**

61	E	II
----	---	----

Name :- ..... Grade :- ..... Index number :- .....

- Question 1 and 2 are compulsory. Answer 5 questions including questions 1 and 2.

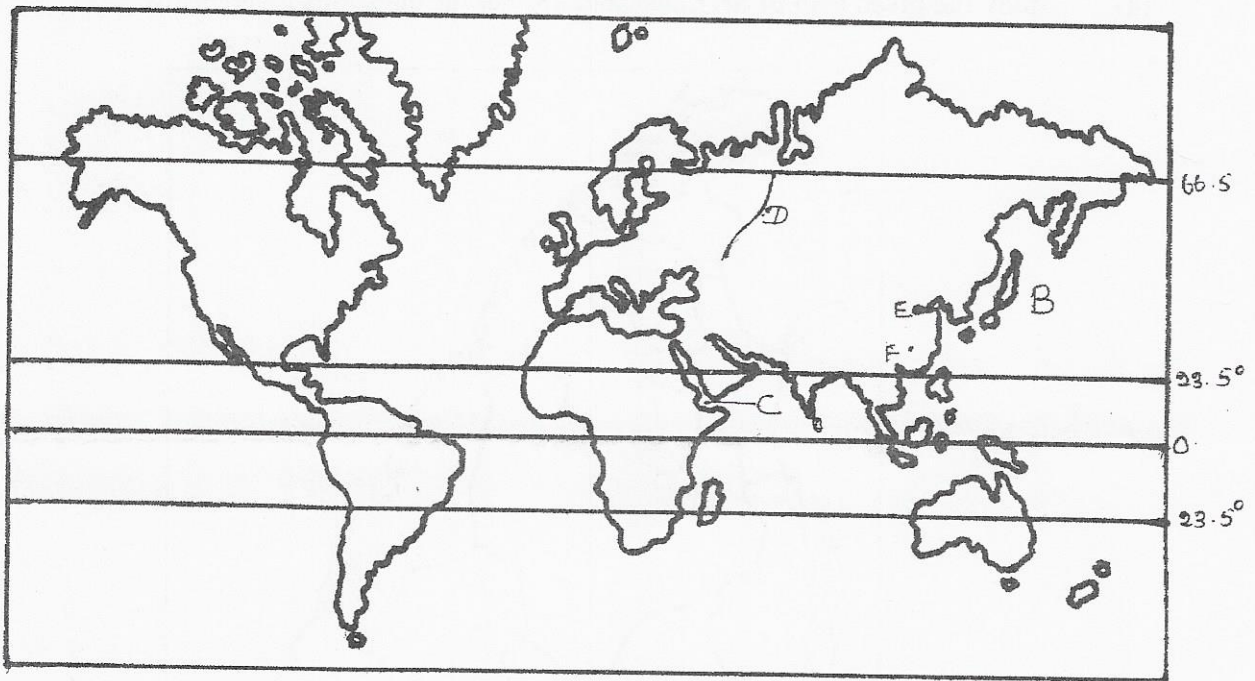
(1) (a) Study the given map of Sri Lanka and answer the questions given below.



- (i) Name the district from which river Mahaweli flows into the sea as 'A'.
- (ii) What is the river denoted by letter 'B'?
- (iii) Colour the district into which the place where Gin river flows into sea belongs in blue.
- (iv) Label the Delft island as 'C'.
- (v) Colour the district of Mulathivu in yellow.
- (vi) Colour the district into which the Sinharaja forest belongs in green.

(1 x 6 = 6 marks)

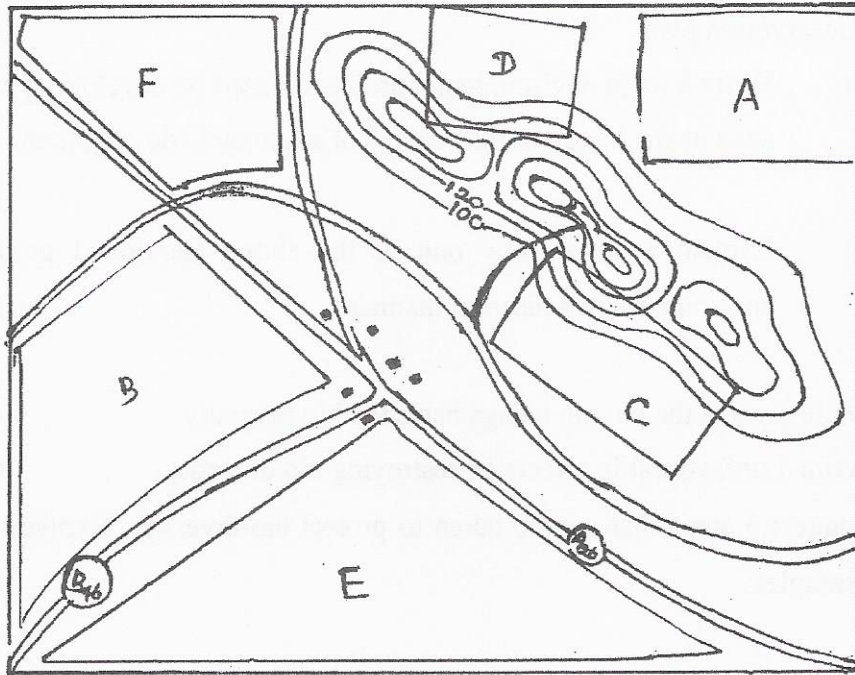
(b) Use the given world map to answer the questions given below.



- (i) Label Mediterranean sea as 'A'.
- (ii) What is the ocean denoted by letter 'B'?
- (iii) Name the sea denoted by letter 'C'.
- (iv) Name the mountain range denoted by letter 'D'.
- (v) Colour Japan which is famous as an industrial country in red.
- (vi) What is the letter that denotes Beijing which is a highly populated city? .....

(1 x 6 = 6 marks)

(2) Use the topographic map to answer the questions given below. (Use the conventional signs and colours.)



- (i) A Chena is denoted by letter 'A' (01 mark)
- (ii) A paddy field is denoted by letter 'B' (01 mark)
- (iii) A tea cultivation is denoted by letter 'C' (01 mark)
- (iv) A rubber cultivation is denoted by letter 'D' (01 mark)
- (v) A gardenland is denoted by letter 'E' (01 mark)
- (vi) A coconut cultivation is denoted by letter 'F' (01 mark)
- (vii) Mark bridges where necessary. (02 marks)
- (viii) A provincial border runs parallel to the main river. (01<sup>2</sup> mark)
- (ix) School, hospital and police station are located in the junction. Draw the appropriately. (02 marks)

- (3) (i) What is meant as development of a country? (03 marks)
- (ii) Write 4 indicators used to measure the development of countries. (04 marks)
- (iii) There are spatial variations in development in Sri Lanka. Describe the factors that affect this situation using 3 examples. (05 marks)

- (4) (i) Write 3 advantages of sustainable development. (03 marks)
- (ii) Write 4 steps taken to protect the environmental balance under the national conservation plan. (04 marks)
- (iii) a) Write 3 main environmental problems faced by developing countries such as Sri Lanka in the process of sustainable development. (03 marks)
- b) Explain in brief how one of the above mentioned problems affects the environment in a harmful manner. (02 marks)
- (5) (i) Write 3 ways the human beings harm the bio diversity. (03 marks)
- (ii) Write 4 unfavourable effects of destroying bio diversity. (04 marks)
- (iii) Suggest 3 steps that can be taken to protect bio-diversity. Explain 2 of them using examples. (05 marks)
- (6) (i) Name the area and the country where the highest temperature of the continent of Asia is reported. (03 marks)
- (ii) Name the 4 climatic types found in the tropical zone. (04 marks)
- (iii) Write three special characteristics of the frigid zone and explain one in brief. (05 marks)