

## Third Term Test - Grade 7 - 2019

**Time : 02 hours.**

1 Answer all the questions.

---

1 Select the most suitable answer and write it on the given space for question no. 01 to 05.

01. Sri Lanka is located in the ..... climate.  
(frigid, temperate, tropical)

02. .... occur due to the air disturbances in the Bay of Bengal.  
(Convectional rain, Cyclones, Monsoon rain)

03. .... is a natural world heritage located in Sri Lanka,  
(Sinharaja forest, Galle fort, Sigiriya)

04. Indigenous people in ..... are adapted to the modern society.  
(Mahiyanganaya, Dambana, Hennanigala)

05. .... which has the highest literacy rate is located in the South Asia.  
(Sri Lanka, Maldives, India)

1 If the given statements are correct put '3' if not put '6' for question no. 06 to 10.

06. Although the Earth is considered a spherical object, it is not a full sphere. ( )

07. The International Date Line is marked using the  $0^{\circ}$  longitudinal line. ( )

08. Large water bodies located close to continents are called seas. ( )

09. A limit of 24 nautical miles from the coast is called the territorial sea limit. ( )

10. Sri Lanka is considered a multi-racial, multi religious and multi-cultural country. ( )

I Select the most suitable answer and write the letter of the answer on the given space for question no 11 to 15.

- |                              |                       |                             |
|------------------------------|-----------------------|-----------------------------|
| (A) Tropic of cancer         | (B) Equator           | (C) Tropic of Capricorn     |
| (D) Arctic circle            | (E) Antarctic circle  | (F) International date line |
| (G) Greenwich prime meridian | (H) Specific location | (I) Relative location       |

11. Showing the location of a country with reference to longitudes and latitudes is, ( )

12. The line drawn horizontally on the middle of the globe is, ( )

13.  $66\frac{1}{2}^{\circ}$  North latitude is called, ( )

14. The main longitudinal line drawn from North to South in the globe is, ( )

15.  $23\frac{1}{2}^{\circ}$  South latitude is called, ( )

I Underline the most suitable answer for question no. 16 to 20.

16. The river that is located in the wet zone in Sri Lanka is,

- (i) Mahaweli river    (ii) Kelani river    (iii) Menik river    (iv) Kala oya

17. What is the landscape that palmyrah products can be seen?

- (i) Landscape of wet zone.    (ii) Landscape of dry zone.  
(iii) Landscape of Jaffna penisular.    (iv) Landscape of the coastal belt.

18. A reason for occuring Tsunami is,

- (i) Thunder bolt    (ii) Bushfires  
(iii) Earth quakes in the see bed    (iv) Flood

19. How we work after a disaster according to the disaster management cycle?

- (i) Protect the forest cover.    (ii) Protect the catchment areas.  
(iii) Conduct health programmes.    (iv) Provide food and beverages to the refugees.

20. A problem related to the production and usage of energy resource is,

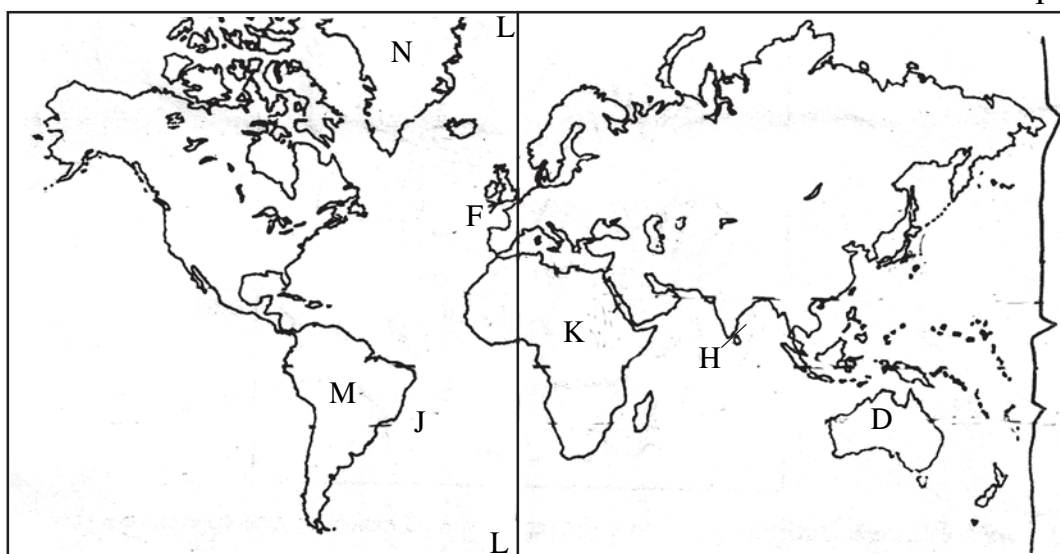
- (i) dimidiate the generating hydropower.    (ii) increase the mental stress.  
(iii) destroy the infrastructure facilities.    (iv) covered the coastal areas in water.

## Part II

1 Answer 05 questions including the first question.

01. Study the given map of Sri Lanka and answer the questions.

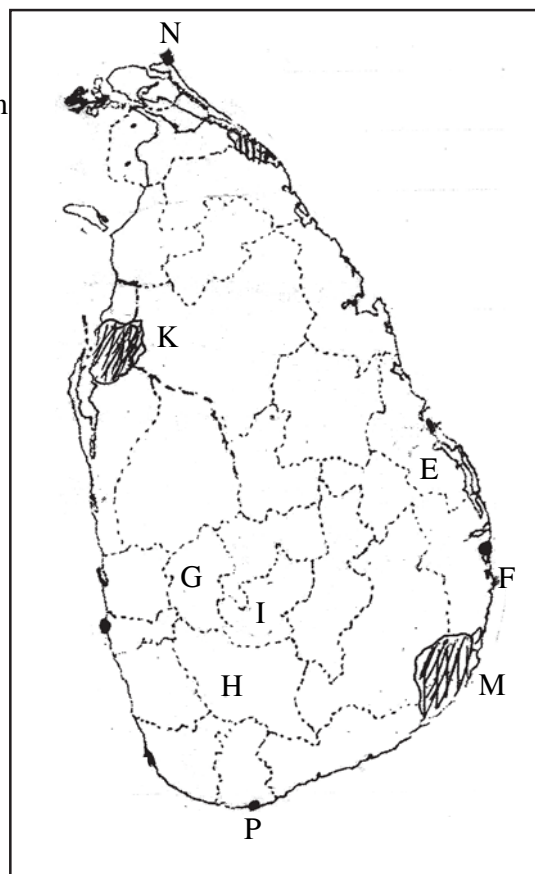
(A)




- (i) Letter ..... shows the smallest continent that is a single country in the world. (1 Mark)
- (ii) Letter ..... shows the international date line. (1 Mark)
- (iii) What is the strait shown by letter 'H'? (2 Marks)
- (iv) What is the continent shown by letter 'M'? (2 Marks)

(B) Study the given map of Sri Lanka and answer the questions.

- (i) Sangamankanda point that is related to the width of Sri Lanka is shown by letter ..... (1 Mark)
- (ii) Letter ..... shows the Rathnapura district that frequently face flood. (1 Mark)
- (iii) What is the forest reserve shown by letter 'K'? (2 Marks)
- (iv) What is the point that is shown by letter 'N'? (2 Marks)



- (C) Following pictures A, B, C and D show the main religious institutes in Sri Lanka. Write the name of the religion that they are belonged on the given space.



(4 Marks)

.....

02. (i) Following are the affects of drought to the man and to the environment. Write them in the table correctly.

(Scarcity of water, Spread epidemics, Occur bushfires, Infertility of soil, Scarcity of food, Destruction of forests, decrease of the agricultural harvest, Destruction of biological resources,)

(8 Marks)

Affects to the man	Affects to the Environment
(1) .....	(1) .....
(2) .....	(2) .....
(3) .....	(3) .....
(4) .....	(4) .....

- (ii) Write a district that following disasters mostly occur.

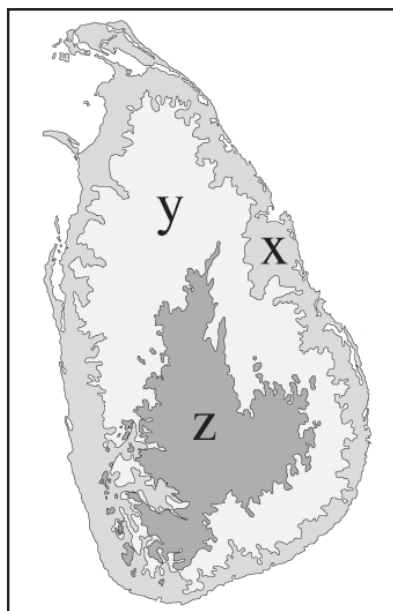
Drought - .....

Landslides- .....

Flood- .....

(3 Marks)

03. Study the given map of the relief zones in Sri Lanka and write answers for given questions.



- (i) Name X, Y, Z relief zones respectively.

(3 Marks)

- (ii) Write one relief features each of those relief zones.

X - .....

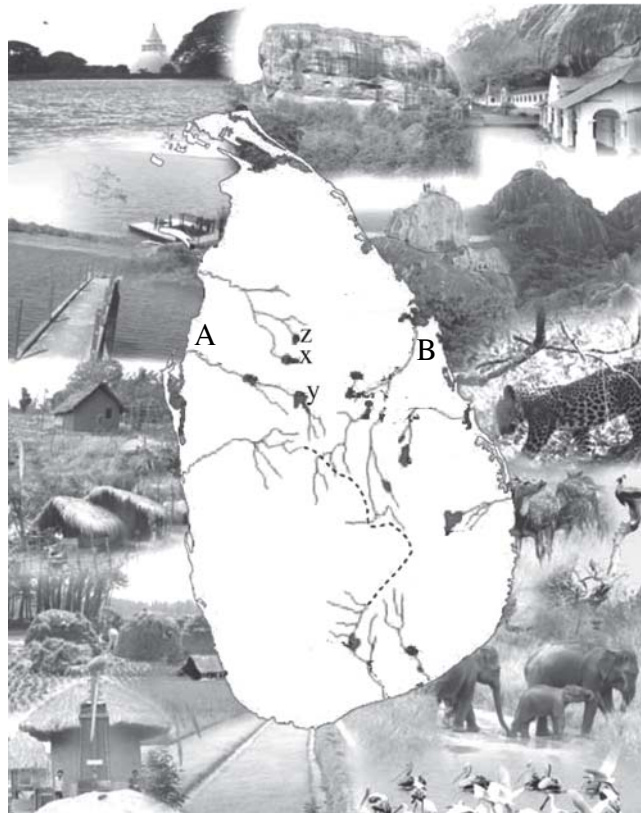
Y - .....

Z - .....

(3 Marks)

- (iii) Name 2 mountain ranges that can be seen in the 'Z' zone. (2 Marks)
- (iv) Name 2 residual hills that can be seen in the 'y' zone. (2 Marks)
- (v) Name a lagoon that can be seen in the 'x' zone. (1 Marks)


04. Following is a map of the landscape of the dry zone of Sri Lanka. Study it and answer the questions.



(5 Marks)

- (i) What is the letter that shows the longest river in the dry zone of Sri Lanka? (2 Marks)
  - (ii) What is the ancient fortress located in this zone? (2 Marks)
  - (iii) Name the 3 tanks shown by letter x, y, z in this zone respectively. (3 Marks)
  - (iv) Name 2 religious places in this dry zone. (2 Marks)
  - (v) Name a sanctuary and a forest reserve in this zone. (2 Marks)
05. (i) Write 3 reasons for climatic changes. (3 Marks)
- (ii) Name 3 disasters due to increase of the temperature of the atmosphere. (3 Marks)
- (iii) Write 2 affects due to increase of the water level of the sea. (2 Marks)
- (iv) Write 3 steps that are taken to minimize the climatic changes. (3 Marks)
06. (i) Write 3 basic components of a map. (3 Marks)
- (ii) What is the scale of a map that is drawn by the Survey Department of Sri Lanka? (2 Marks)
- (iii) Write 3 things that you want to copy a map. (3 Marks)
- (iv) Write 3 different types of maps in the Sri Lanka Atlas book. (3 Marks)

07. Complete the puzzel using given clues.



### Down

- (1) The Earth takes this shape.
- (2) A waterfall in the central hills.
- (3) A basic element of a map.
- (4) Types of plants grown in river mouths and lagoons.
- (5) A natural vegetation can be seen in plateaus.
- (6) Industrial settlements can be seen here.
- (7) The line of  $23\frac{1}{2}^{\circ}$  North latitude is known as the tropic of .....

### Across

- (7) The country that has the highest social development in South Asia is,
- (8) A man made religious center under tangible heritage.
- (9) A natural disaster mostly occurs in Sri Lanka.
- (10) A method that Sri Lanka receives rainfall.



# Provincial Department of Education - NWP

Provincial Department of Education  
Provincial Department of Education  
Provincial Department of Education  
Provincial Department of Education  
Provincial Department of Education  
Provincial Department of Education

තෙවන වාර පරීක්ෂණය - 7 ශ්‍රේණිය - 2019

Third Term Test - Grade 7 - 2019

## Geography - Answer Sheet

### Part I

- |                     |       |       |           |
|---------------------|-------|-------|-----------|
| 1. Tropical         | 6. 3  | 11. H | 16. (ii)  |
| 2. Cyclones         | 7. 5  | 12. B | 17. (iii) |
| 3. Sinharaja forest | 8. 5  | 13. D | 18. (iii) |
| 4. Hennanigala      | 9. 5  | 14. G | 19. (iii) |
| 5. Maldives         | 10. 4 | 15. C | 20. (i)   |
- (2 5 20 = 40 Marks)

### Part II

- |  |  |
|--|--|
| 01. (A) (i) D                                    | (iii) Mihinthalaaya, Dimbulagala, Sigiriya                                     |
| (ii) T - T                                       | (iv) Batticaloa, Puttalam lagoon, Jaffna lagoon, Negombo lagoon                |
| (iii) Palk strait                                |  |
| (iv) South America                               |  |
| (B) (i) F  | 04. (i) B  |
| (ii) H   | (ii) Sigiriya  |
| (iii) Wilpaththu                                 | (iii) x - Nachchaduwa tank y - Kala oya<br>z - Mahakanadara wewa               |
| (iv) Point Pedro                                 | (iv) Sri Maha Bodhiya, Madu Church,<br>Koneshwaram Kovil, Katharagama<br>Devol |
| (C) A - Hinduism B - Buddhism                    | (v) Sanctuaries - Yala, Wilpaththu,<br>Kumana                                  |
| C - Islam D - Catholicism                        | Forest reserves - Somawathi,<br>Maduru oya, Wasgamuwa                          |
| 02. (i) • Affects to the man                     | 05. Answer in page no, 57, 58  |
| Scarcity of water                                |  |
| Spread of epidemics                              |  |
| Scarcity of food                                 |  |
| Destruction of the agricultural harvest          |  |
| • Affects to the environment                     | 06. (i) Direction, Scale, Key, Index   |
| Occur bushfire                                   | (ii) 1:50000   |
| infertility of soil                              | (iii) Tissue papers  |
| destruction of forests                           | Pencils  |
| Destruction of biological resources              | Paper pins   |
| (ii) Page 50, 51, 53                             | (iv) Give marks for the correct answers.                                       |
| Give marks for correct answer                    |  |
| -  | 07. Down Across  |
| 03. (i) x Coastal plain                          | 1. Spherical   |
| y Intermediate plain                             | 2. Rawana  |
| z Central hills                                  | 3. Index   |
| (ii) x bay, lagoons, points, islands, plains     | 4. Mangroves   |
| y residual hills, ridges, plains                 | 5. Patanas   |
| z mountains, plateaus, gaps, valleys, waterfalls | 6. Rathmalana  |
|  | 7. Cancer  |
|  | 8. Katharagama   |
|  | 9. Flood   |
|  | 10. Convectional   |