

Grade 7 Year End Test - 2019 **61 E I**

**Geography I** Time: Two Hours

Name/ Index No : .....

**Instruction:** · This paper consists of 20 multiple choice questions.  
· Follow the instructions given to answer the questions.

• For the questions from 1 to 5, choose the most appropriate answer form the brackets.

- The earth's movement around its own axis while revolving round the Sun is called.....(Revolution / rotation / deflection).
- African continent and Asian continent are bounded by ..... (Red Sea / Yellow Sea / Timor Sea)
- Sri Lanka recives ..... rainfall in the months of March and April. (Convection / North east monsoon / South east monsoon).
- Information represented on the map is shown in the .....by conventional signs. (Scale / Key / Index )
- The largest rain forest that is called as “ earth's lungs” was burnt in the month of August in 2019 is..... (Kongo forest / Amazon forest / Tiga forest)

• For the questions form 6 to 10, match A and B Columns.

- |   |              |
|---|--------------|
| A.  | B.           |
| 6. Terraced cultivated lands can be seen in abundance.  | Jaffna       |
| 7. Scrubs is a main characteristic of the physical landscape.                                       | Nuwara-Eliya |
| 8. Flood occurs during south - west monsoon   | Anuradhapura |
| 9. Ground water is used for the cultivation in limestone mixed soil.                                | Hambantota   |
| 10. Mahaweli Planned settlements with all facilities is a main component of the cultural landscape. | Ratnapura    |

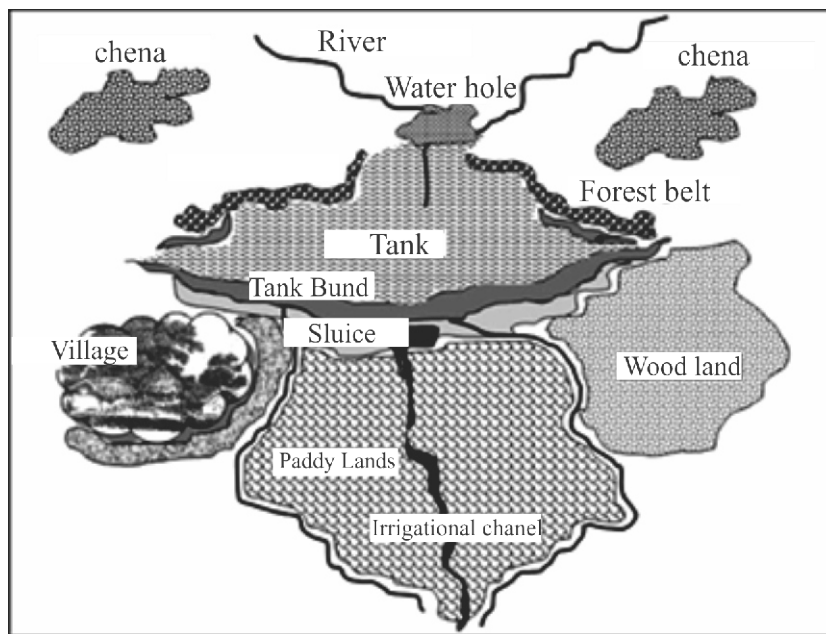
• For the questions from 11 to 15 read the statement carefully and circle T if it is true and circle F if it is false.

- China is a country located in Southern Hemisphere. ( T / F )
- Arugambe coastal line in eastern coast of Sri Lanka is a popular tourist hub. ( T / F )
- The most of cyclones that hit Sri Lanka origin in Bay of Bengal. ( T / F )

14. Tsunami can occur due to volcanic eruption and falling of meteoroid into the ocean. ( T / F )
15. Temperate climatic zone is located between Tropic of Cancer and Tropic of Capricorn. ( T / F )

• For the questions from 16 to 20, write the number of correct answer on the dotted line.

16. Which continent lies across equator.  
 I. North America                      II. Europe                      III. Australia                      IV. Asia
17. The answer gives only man made heritages is..  
 I. Kandy sacred city, Dambulla Viharaya, Galle fort  
 II. Sigiriya, Sinharaja forest, Dambulla Viharaya  
 III. Anuradhapura sacred city, Yapahuwa, Galle fort  
 IV. Galle fort, Hortain plain, Polonnaruwa ruins city.
18. Which is not responsible for droughts?  
 I. Setting fire on forests                      II. Filling low lands  
 III. Increasing global warming                      IV. Dry wind
19. Which district is not located in the boundary of Central province?  
 I. Kurunegala                      II. Ratnapura                      III. Badulla                      IV. Monaragala
20. The following map depicts salient features of a certain landscape of Sri Lanka.



- The above diagram depicts the landscape of...  
 I. Wet zone                      II. Dry Zone                      III. Hill region                      IV. Coastal zone

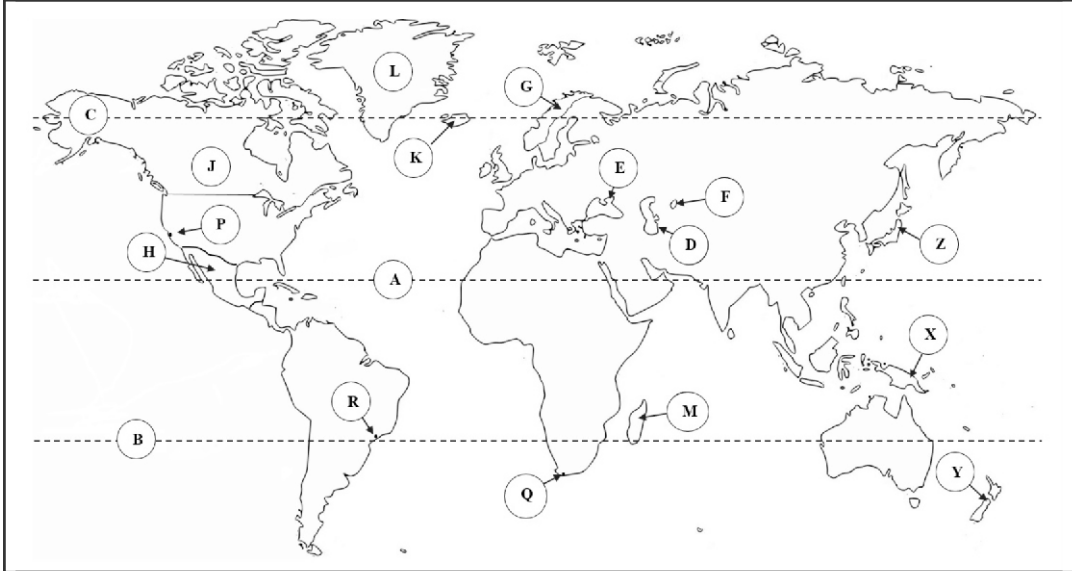
## Geography II

### Instructions:

- \* **Question No. 1 is compulsory.** It consists of Part A, B and C.
- \* Choose **four** questions from question No. 2 to 7.
- \* Answer **five** questions altogether.

01 A. Answer the following questions based on the map of world.

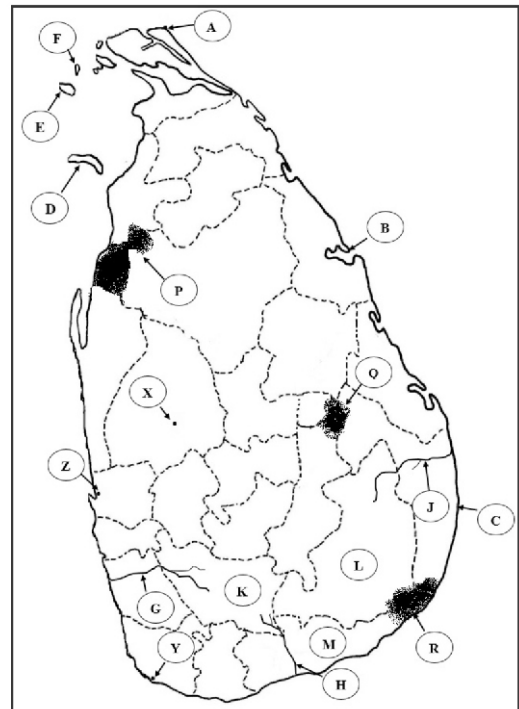
(1 x 6= 06 marks)



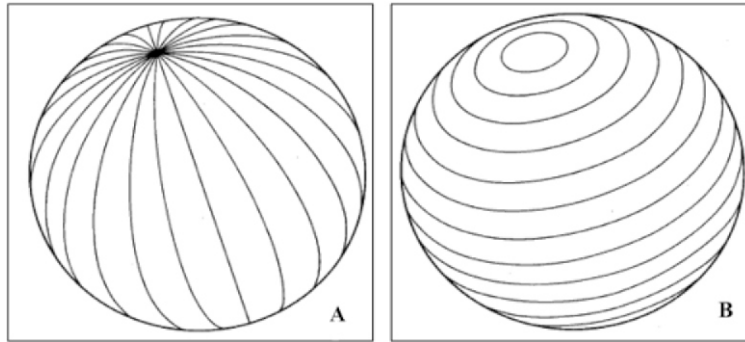
- I. Which letter denotes Tropic of Cancor among letters A, B and C?
- II. Which letter shows the Caspian Sea among letters D, E and F?
- III. Which letter depicts Norway among letters G, H and J?
- IV. Which letter denotes iceland among letters K, L and M?
- V. Which letter shows Rio de Janeiro among letters P,Q and R?
- IV. Which letter depicts New-Zealand that won runners up in World Cricket Cup among letters X, Y and Z?

B. Answer the following questions based on the map of Sri Lanka. (1 x 6 = 06 marks)

- I. Which letter shows Sangamankanda point among letters A,B and C?
- II. Which letter depicts Delft island among letters D, E and F?
- III. Which letter denotes Kalu Ganga that floods occur frequently among letters G, H and J?
- IV. Which letter denotes Hambantota that droughts occur among letters K,L and M?
- V. Which letter shows Willpattu National Park among letters P, Q and R?
- VI. Which letter depicts Katunayake Investment Promotion Zone among letters K, Y, and Z.



2. The following diagrams depicts imaginary lines. Identify and name these imaginary lines. Write your answer against the relevant letter. (1.5 x 2 = 03)



- II. Names of seas are given in the brackets. Choose the seas that are connected to the Atlantic Ocean and name them. (04 marks)

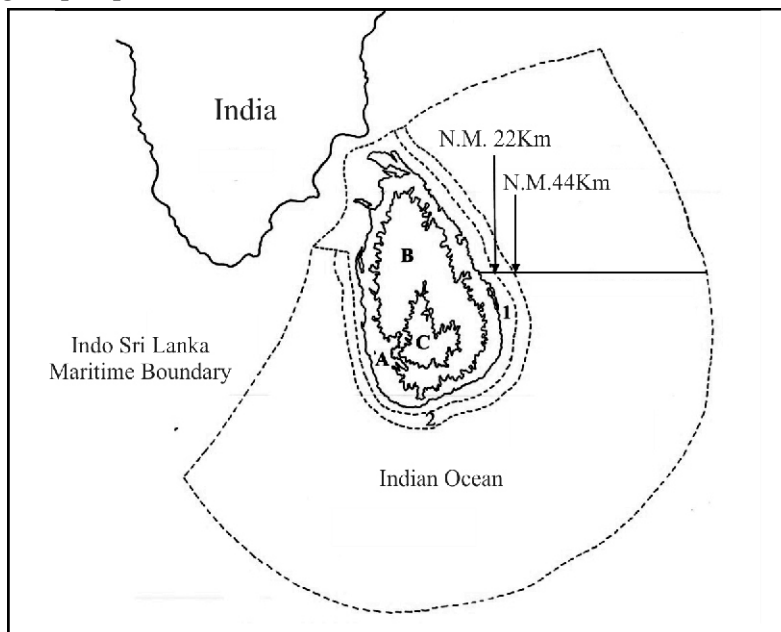
(Arabian Sea / Caribbean Sea / Baltic Sea / Earl Sea / Okotsk Sea / North Sea / Yellow Sea / Mediterranean Sea / Beaufort sea / Caspian Sea / Red Sea / Japanese Sea)

- III. A. Name two islands that belong to Asian Continent except Sri Lanka. (02 marks)

- B. In which continents the following countries are located. (03 marks)

a. Brazil      b. Sudan      c. France

3. The following map depicts sea limits and relief zones of Sri Lanka.



- I. Name the three sea limits shown in the map 1, 2 and 3. (03 marks)

- II. a. Name two relief zones that are named as A and B in the above map. (02 marks)

b. Write two examples for residual hills that can be seen in the zone B. (02 marks)

- III. C in the map depicts Central hills. Name five topographical features in that relief zone. (05 marks)

4. I. Write the religious groups that celebrate the following religious ceremonies.

A. Thaipongal      B. Hajj      C. Madu festival (03 marks)

- II. Name the four main ethnic groups live in Sri Lanka. (04 marks)

- III. A) Name three south Asian countries except Sri Lanka. (03 marks)

B) 'Sri Lanka has acquired relatively higher level in the field of social development when compare with other South Asian countries'. Write two factors to prove the statement.

(02 marks)

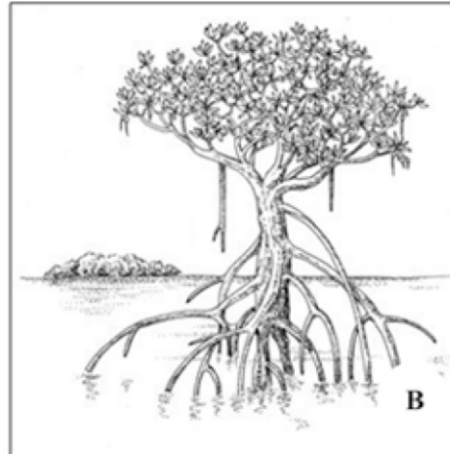
5. I. Natural disasters are given in the following box. Choose three disasters that intensify due to human activities. (03 marks)

Earthquakes / Landslides / Floods / Tsunami / Droughts / lightning.

II. Write two natural factors and two human factors that cause landslides. (04 marks)

III. State five steps that can be taken to minimize the impacts of lightning. (05 marks)

6. The following diagrams depict two plant species that can be found in two different landscapes.



I. Type A and B plants can be seen in which landscapes? Choose the answer from the brackets, & Write your answer against the relevant letters.  
( Hill country landscape / Coastal landscape / Dry zone landscape / Jaffna Peninsular and immediate islands/ Wet zone landscape) (1.5 x 2 = 03 marks)

II. A. Name two districts in eastern province where there is the dry zone landscape. (02 marks)

B. Name two prominent climatic characteristics in dry zone landscape. (02 marks)

III. Write five special characteristics that can be seen in the human landscape of wet zone. (05 marks)

7. I. Name three factors affecting climate change. (03 marks)

II. Write four disasters that occur due to increasing of atmospheric temperature. (04 marks)

III. The Three main steps of the Disaster Management Cycle is given in the following table. Choose the relevant action that is taken during a disaster from the brackets and write it in the correct column. (05 marks)

ඉදිරිපසය	දැඩි අවදානමක් දැරීමේදී	පිටුපසය
.....	● .....	
● .....	● .....	● .....

Collect victims to safety place, plan the activities to restore the mental health of the victims, Identify the hazardous zones and moving away from them, provide food and beverages to the refuges, protect catchment areas.

