



PROVINCIAL DEPARTMENT OF EDUCATION - NORTH WESTERN PROVINCE

FIRST TERM TEST - 2018

Grade 07

WESTERN MUSIC

Two Hours

Name / Index No. :

Answer all questions on this paper itself.


Part - I


- **Underline the correct answer.**


01. Hewisi are played in a


- (1) Church (2) Kovil (3) Mosque (4) Temple

02. Which of the following has 4 semitones

(1) 

(2) 

(3) 

(4) 

03. Which of the following bird has a singing tone?

- (1) Mynah (2) Magpie Robin (3) Kingfisher (4) Crow

04. Height and depth of a sound is known as,

- (1) Melody (2) Phrase (3) Pitch (4) Rhythm

05. The letter name of circled note is

- (1) F (2) G (3) A (4) B



06. Which percussion musical instrument is consisting 2 metal plates?



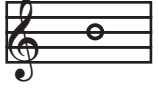



- (1) Side drum (2) Xylophone (3) Bass drum (4) Cymbol

07. Suitable time signature for this rhythm pattern is, 

- (1) $\frac{2}{4}$ (2) $\frac{3}{4}$ (3) $\frac{2}{8}$ (4) $\frac{2}{2}$

08. A religious function that falls in the month of June?

- (1) Vesak (2) Poson (3) Deepavali (4) Christmas

09. Which of the following is generally used for left hand?
 (1) Treble Clef (2) Alto Clef (3) Bass Clef (4) Tenor Clef
10. Which of the following is not a Song suitable for "Round" ?
 (1) Jamaican Farewell (2) Softly sings the donkey
 (3) Kookabura (4) Row Row Row your boat
11. A black note with a stem and tail is called
 (1) Quaver (2) Crotchet (3) Minim (4) Semibreve
12. Double bar line is usually written.
 (1) At the beginning of a bar (2) In the middle of a bar
 (3) In the middle of notes (4) At the end of the bar
13. Which of the following equal to 3 tones.
 (1) 7 semitones (2) 5 semitones (3) 6 semitones (4) 4 semitones
14. A raises a note by one semitone
 (1) Flat (2) Sharp (3) Natural (4) Tone
15. "Snare drum" is also called.
 (1) Kettle drum (2) Bass drum (3) Side drum (4) Tenor drums
16. Which of the following is the correct value of 
 (1) 2 counts (2) 1 count (3) 4 counts (4) 1/2 count
17. The instrument that is used to accompany virindu.
 (1) Drums (2) Violin (3) Organ (4) Rabana
18. The given note plays in a recorder is, 
 (1)  (2) 
 (3)  (4) 
19. Which note is in centre of the Great staff?
 (1) E (2) Middle C (3) D (4) B
20. The composer who wrote "old music" ?
 (1) Scott Joplin (2) George Gershwin (3) Benjamin Britten (4) J.S. Bach

(1 x 20 = 20 Marks)

Part II

- Answer three questions including the question No. 01

01.

HICKORY DICKORY DOCK


- (1) What is the title (name) of the piece (1 mark)
 - (2) How many bars are there in the piece? (1 mark)
 - (3) What is the time signature of the piece (1 mark)
 - (4) Explain the time signature simple (Duple / Triple) (1 mark)
 - (5) Write the English meaning of *f*..... *p*..... (1mark)
 - (6) How many bars have dotted minim notes (♩̣) (1 mark)
 - (7) How many times does the music occurs? (1 mark)
 - (8) Write the letter name of circled notes (A) and (B) A..... B..... (1 mark)
 - (9) What is the "Accidental" used in this piece? (1 mark)
 - (10) Name a rest mark occur in this piece? (1 mark)
- (10 marks)

02. Name the following notes

.....

(1 x 5 = 05 marks)

(2) **Match A with B**

- | | | |
|--|---|------------|
| • G clef is | Semitone | |
| • Instruments played with two sticks | Unpleasant | |
| • The smallest distance in pitch between two notes | # | |
| • Bomb blast |  | |
| • Sharp sign | Side drum | (05 marks) |






03. (1) **Fill in the blanks with the correct word chosen from the bracket.**

(F, Indefinite, five, New year, ascending)

- The staff is made up of parallel lines.
- Notes going up in a scale is called
- The Bass clef is also known as clef.
- Both Tamil and Sinhala people celebrate
- Percussion instruments divide into definite and

(5 marks)

(2) **Draw 5 indefinite pitched percussion instruments and name them.**

(01)	(02)	(03)
		
(04)	(05)	
		

(05 marks)

04. (1) **State whether each of these forms a Tone or Semitone.**



(05 marks)

(2) **Draw a key board and mark the following notes.**

- B flat - ①
- C - ②
- F - ③
- G Sharp - ④
- E - ⑤

(05 marks)

Grade 07

ANSWER PAPER

Western Music

Paper I

- | | | | | | | |
|-----------|-----------|-----------|-----------|-----------|-----------|------------|
| 01. - (4) | 02. - (1) | 03. - (2) | 04. - (3) | 05. - (2) | 06. - (4) | 07. - (1) |
| 08. - (2) | 09. - (3) | 10. - (1) | 11. - (1) | 12. - (4) | 13. - (3) | 14. - (2) |
| 15. - (3) | 16. - (1) | 17. - (4) | 18. - (3) | 19. - (2) | 20. - (4) | (20 marks) |

Part II

01. (1) Hickory Dickory Dock (2) 16 bars (3) $\frac{3}{4}$ (4) Simple triple
 (5) *f*-loud *P*- soft (6) 6 (7) 4 times (8) A - Middle C B - A
 (9) Flat (10) Crotchet or Semibreve (10 marks)

02. (1) 

C natural A Flat B A sharp Middle C

(5 marks)

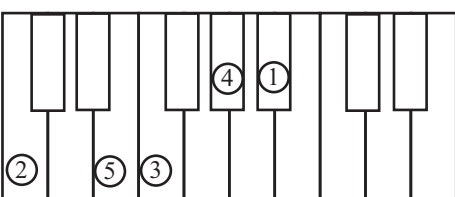
- (2) • G clef is _____ Semitone
 • Instruments played with two sticks _____ Unpleasant
 • The smallest distance in pitch between two notes _____ #
 • Bomb blast _____ Side drum (05 marks)
 • Sharp sign _____

03. (1) (i) five (ii) ascending (iii) F (iv) New year (v) Indefinite
 (05 marks)

- | | |
|-------------------------|------------------------|
| • Side drum (Sharedrum) | • Maraccas |
| • Bass drum | • Castenets (clappers) |
| • Cymbal | • Gong (Tam Tam) |
| • Triangle | • Sleigh bells |
| • Tambourine | • Wood block |

(Any indefinite percussion instrument) (05 marks)

04. (1) (i) Tone (ii) Semitone (iii) Semitone (iv) Tone (v) Tone
 (05 marks)

(2) 

- B flat - ①
- C - ②
- F - ③
- G sharp - ④
- E - ⑤

(05 marks)