



පළාත් අධ්‍යාපන දෙපාර්තමේන්තුව - උතුරු මැද පළාත  
மாகாணக் கல்வித் திணைக்களம் - வட மத்திய மாகாணம்  
DEPARTMENT OF EDUCATION - NORTH CENTRAL PROVINCE



Grade

07

### Third Term Test - 2022

Subject :- ...Geography I,II.....

School Name : .....

Index Number : .....

Time : 2 hrs

## Paper I

Answer all the questions

- For question number 1 to 5, Select the correct answer from the brackets and write it on the provided blank.

- Total surface area of the Earth is..... million km<sup>2</sup>. ( 560 / 510 / 570 )
- ..... can be found in arid and semi – arid regions of Sri Lanka.  
(Thorny bushes / Mangroves / Grass types)
- Among the South Asian countries, Sri Lanka is second only to ..... in the level of literacy.  
( India / Pakistan / Maldives)
- The Caribbean Sea belongs to the ..... Ocean.  
( Indian / Pacific / Atlantic)
- On a commercial basis vegetables, fruits and flowers are cultivated , .....  
( in the Hilly region/ in coastal belt/ intermediate zone)

- If the statements given from numbers 6 to 10 are correct, put a ( ✓ ) mark and a ( ✗ ) mark if they are incorrect.

- The Caspian Sea and the Aral Sea are located in the continent of Asia. ( .....)
- Sri Lanka usually has a dry weather condition in January and December months. ( .....)
- The key is essential to read maps ( .....)
- Earthquakes generate in the sea cause to occur a tsunami. ( .....)
- Wet zone landscapes are changing constantly. ( .....)

- For question number 11 to 15, write the correct answer in the blank.

- ..... which is a residual hill, has been a fortress since the ancient times.
- ..... is occurred in the land due to the change of high temperature and pressure in the interior of the Earth.
- 12 nautical miles from the coast of the sea is known as the .....
- It is impossible to draw all the things found on the land at the same size on the map, so when making maps we use .....
- Denoting the location of a country based on its immediate surroundings is called as ..... location.

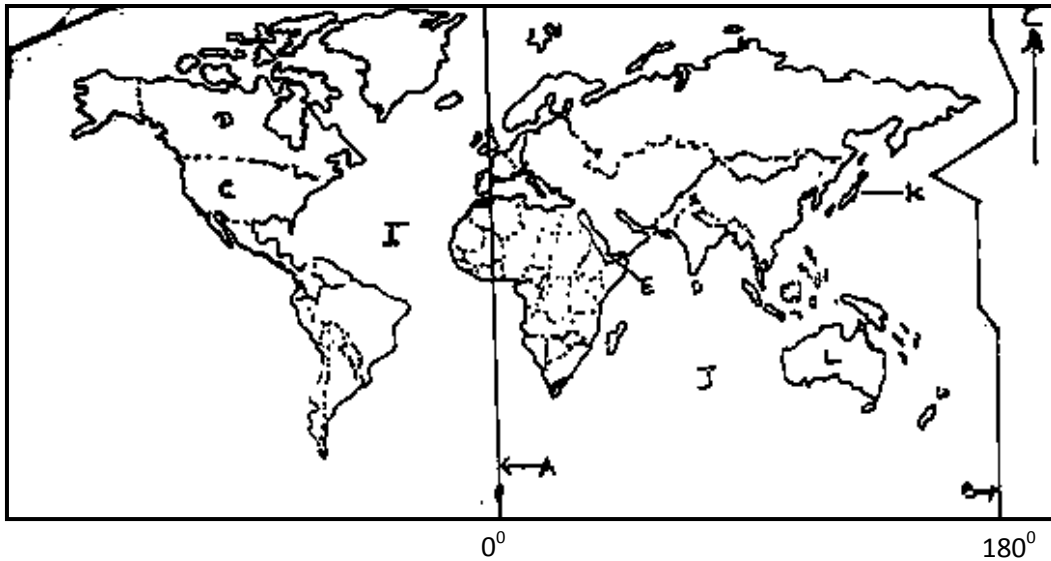
- For question number 16 to 20, choose the correct answer and underline it.

- 16) An island located near the Jaffna Peninsula of Sri Lanka is,
- Kites
  - Mannar
  - Chundikulam
  - Pigeon Island
- 17) What is the man-made world heritage in Sri Lanka?
- Nallur kovil
  - Fedrick Fort
  - Dambulu Temple
  - Peradeniya Botanical Garden
- 18) The time period having convectional rainfalls to Sri Lanka is,
- May, June
  - November, December
  - March, April
  - October, November
- 19) The smallest ocean in the world is ,
- Pacific Ocean
  - Arctic Ocean
  - Antarctic Ocean
  - Atlantic Ocean
- 20) Which of the following is not a reason for changing the global climate?
- Deforestation
  - Warming of the atmosphere
  - Informal constructions
  - Agricultural and industrial waste burning

- First question is compulsory.
- Answer 5 questions including the first question.

## Paper II

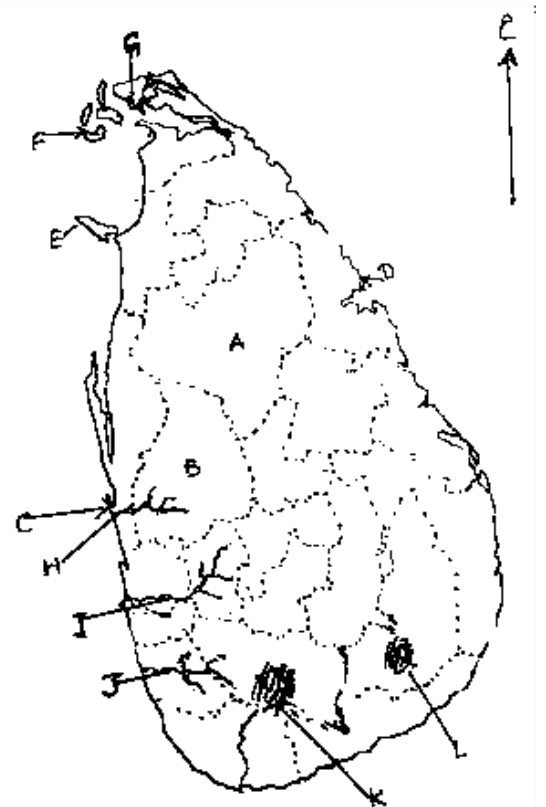
01) A) Study the given map of the world and answer the questions given below. (6 marks)



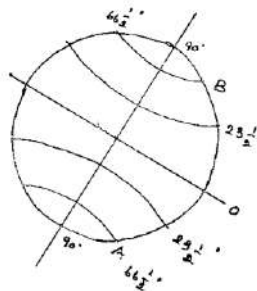
- Which letter represents the International Date Line?
- Which letter represents the Red Sea?
- Which letter represents the continent of Australia?
- Which letter represents United States of America?
- Which letter represents Japan?
- Which letter represents the Indian Ocean?

B) Answer the questions by studying the given Sri Lankan map. (6 Marks)

- Which letter represents Jaffna?
- Which letter represents Kurunegala District?
- Which letter represents Kelani River?
- Which letter represents Sinharaja forest?
- Which letter indicates the location of Koneswaram temple?
- Which letter represents the island of Mannar?



- 02) i) Name A and B in the given diagram. (2 Marks)
- ii) Briefly explain what are Latitudes and Longitudes. (4 Marks)
- iii) Name the lines with the given values of the below diagram.
- a) x latitude 0 line- ..... (2 Marks)
- 23  $\frac{1}{2}$  North latitude - ..... (4 Marks)
- b) Briefly explain what is Earth rotation and revolution. (4 Marks)



- 03) i) Name the 2 relief zones mentioned as A and B in the above Sri Lankan map. (2 Marks)
- ii) Name 4 Topographical features that can be seen in zone C. (4 Marks)
- iii) a) Name 2 cultivations done in the landscape of the Wet Zone. (2 Marks)
- b) Briefly explain the damages done to the environment by human and the emerged problems in that zone. ( 4 Marks)



- 04) i. Name 2 other ethnic groups in Sri Lanka except Sinhalese. ( 2 Marks )
- ii. Name two main categories of National Heritages (Cultural Heritages) and provide 1 example for each. (4 Marks)
- iii. After providing the following facilities to the people of a country, mention one advantage of each.
- Providing a nutritious diet.
  - Improvement of educational facilities.
  - Improvement of medical and health care facilities. ( 6 Marks)
- 05) i. Name 2 parks that can be seen in the landscape of the Dry Zone. (2 Marks)
- ii. Name 2 factors affect to make a landscape of dry zone. (4 Marks)
- iii. a) Name two different religious places that are regularly worshiped in this region. (4 Marks)
- b) Briefly explain the solutions taken to water scarcity in dry zone. (4 Marks)
- 06) i. Name 2 districts that affects droughts in Sri Lanka. (2 Marks)
- ii. Name 4 impacts to people of a drought. (4 Marks)
- iii. Name 3 impacts to the environment of a drought and describe one of them. (6 Marks)
- 07) i. Name two natural hazards affecting Sri Lanka. (2 Marks)
- ii. Explain the difference between hazards and disaster. (4 Marks)
- iii. a) Name three stages of the disaster management cycle. (3 Marks)
- b) Briefly explain how to face with one of them. (3 Marks)





LOL.lk  
BookStore

විභාග ඉලක්ක

පහසුවෙන් පසරන්න

ඕනෑම පොතක් ඉක්මනින්  
නිවසටම ගෙන්වා ගන්න



| කෙටි සටහන් | පසුගිය ප්‍රශ්න පත්‍ර | වැඩ පොත් | සඟරා | O/L ප්‍රශ්න පත්‍ර  
| A/L ප්‍රශ්න පත්‍ර | අනුමාන ප්‍රශ්න පත්‍ර | අතිරේක කියවීම් පොත්  
| School Book | ගුරු අත්පොත්



pesuru  
Prabhathana Private Ltd.

Akura Pilot



සමනල  
දැනුම

T

සිංහරා

පෙර පාසලේ සිට උසස් පෙළ දක්වා සියලුම ප්‍රශ්න පත්‍ර,  
කෙටි සටහන්, වැඩ පොත්, අතිරේක කියවීම් පොත්, සඟරා  
සිංහල සහ ඉංග්‍රීසි මාධ්‍යයෙන් ගෙදරටම ගෙන්වා ගැනීමට

www.LOL.lk වෙබ් අඩවිය වෙත යන්න