

	<p>පළාත් අධ්‍යාපන දෙපාර්තමේන්තුව - උතුරු මැද පළාත</p> <p>மாநகராணகக் கல்வித் திணைக்களம் - வட மத்திய மாகாணம்</p> <p>DEPARTMENT OF EDUCATION - NORTH CENTRAL PROVINCE</p>	
<div style="border: 1px solid black; padding: 2px; display: inline-block;">Grade</div> <div style="border: 1px solid black; padding: 2px; display: inline-block;">07</div>	<div style="border: 1px solid black; padding: 2px; display: inline-block;">Subject</div> - <div style="border: 1px solid black; padding: 2px; display: inline-block;">Western Music</div>	<p style="font-size: 1.2em;">- 2022</p>
<p>පාඨශ්‍රී තරඟ /</p> <p>අනුකූලවැඩි අංකය =</p>		<div style="border: 1px solid black; padding: 2px; display: inline-block;">Time</div> = <div style="border: 1px solid black; padding: 2px; display: inline-block;">2 Hours</div>

Part I

- Answer the all questions.
- Underline the most suitable answer.

01. The kettle drum is known as

- | | | |
|--------------|---------------|--------------|
| i. Bass drum | ii. Side drum | iii. Timpany |
|--------------|---------------|--------------|

02. A tone consists of semitones.

- | | | |
|------|-------|--------|
| i. 2 | ii. 3 | iii. 1 |
|------|-------|--------|

03. The principal violinist in the orchestra is called

- | | | |
|--------------|--------------------|-------------|
| i. Conductor | ii. Concert master | iii. Leader |
|--------------|--------------------|-------------|

04. “ x “ This sign is

- | | | |
|----------|----------|-------------------|
| i. Sharp | ii. Flat | iii. Double sharp |
|----------|----------|-------------------|

05. Bajan Gee , are sung by

- | | | |
|-----------|--------------|----------------|
| i. Hindus | ii. Buddhist | iii. Christian |
|-----------|--------------|----------------|

06. “ Inneth Dumbarai Maha Kalu Galak Yata ” is a,

- | | | |
|-------------|---------------|------------------|
| i. Pal kavi | ii. Paarukavi | iii. Pathal kavi |
|-------------|---------------|------------------|

07. The famous Baila singer is

- | | | |
|------------------|-------------------|----------------|
| i. Volly Bastian | ii. Sunil Shantha | iii. Amaradewa |
|------------------|-------------------|----------------|

08. How many performers are involved in a Duet?

- | | | |
|------|-------|--------|
| i. 1 | ii. 3 | iii. 2 |
|------|-------|--------|

09. A similar name for side drum is,

- i. Gong
- ii. Snare Drum
- iii. Bass drum

10. What is the largest section of the orchestra

- i. Wind
- ii. Brass
- iii. String

11. “ ♮ ” This sign is

- i. Natural
- ii. Sharp
- iii. Flat

12. Quick march is usually in

- i. Triple time
- ii. Quadruple time
- iii. Duple time

13. “The Blue Danube” is a

- i. Waltz
- ii. March
- iii. Minuet

14. 4/4 This is a

- i. Triple time
- ii. Quadruple time
- iii. Duple time

15. How many counts in a dotted semibreve?


- i. 6
- ii. 8
- iii. 4

16. Which is not included in Hewisi group

- i. Davula
- ii. Bummadiya
- iii. Horanewa

17. “The Messiah” is a

- i. Concerto
- ii. Sonata
- iii. Oratorio

18.  This conducting pattern use for

- i. Triple time
- ii. Quadruple time
- iii. Duple time

19. Udekkiya is used for

- i. Boat songs
- ii. Carter songs
- iii. Harvesting songs

20. Which rest is use as a whole bar rest

- i. Minim rest
- ii. Semibreve rest
- iii. Crochet rest

Part II

- Answer the all questions

01) I. Write two sentences about simple binary form. (04 marks)


.....

.....


.....

II. Write the ascending of following major scales. The first note is done for you. Add an accidental where necessary. (06 marks)

G MAJOR SCALE ○ ○ ○ ○ ○ ○ ○ #



F MAJOR SCALE ○ ○ ○ ○ ○ ○ ○ b



02) I. Write 2 definite pitch and indefinite pitch percussion instruments. (04 marks)

Definite Pitch	Indefinite Pitch
1.	1.
2.	2.




II. Write the following tonic triads according to the given key signature. (06 marks)



03) I. Add the missing bar lines according to the given time signatures. (05 marks)



II. Name the following intervals and state whether it is melodic or harmonic.




04)

1. Write the required tones and semitones for given notes. (05 marks)




I. Semitone above




II. Semitone above



III. Semitone below



IV. Tone above



V. Tone below

II. Write the meanings of following terms. (05 marks)



.....

f

.....

mf

.....

mp

.....

<

.....

05) Write brief descriptions about followings. (10 marks)

a) J.S. Bach or G.F. Handel

.....
.....
.....
.....
.....

b) Solo / Duet / Trio

.....
.....
.....
.....
.....

06) I. Fill in the blanks. (06 marks)

Solfa Names	Technical Names
Doh
Fah
.....	Super Tonic
La
.....	Mediant
Soh

II. What are the main four sections of the orchestra? (04 marks)

1.....

2.....

3.....

4.....



LOL.lk
BookStore

විභාග ඉලක්ක

පහසුවෙන් පසරන්න

ඕනෑම පොතක් ඉක්මනින්
නිවසටම ගෙන්වා ගන්න



| කෙටි සටහන් | පසුගිය ප්‍රශ්න පත්‍ර | වැඩ පොත් | සඟරා | O/L ප්‍රශ්න පත්‍ර
| A/L ප්‍රශ්න පත්‍ර | අනුමාන ප්‍රශ්න පත්‍ර | අතිරේක කියවීම් පොත්
| School Book | ගුරු අත්පොත්



pesuru
Prabhathana Private Ltd.

Akura Pilot



සමනල
දැනුම

T

සිංහරා

පෙර පාසලේ සිට උසස් පෙළ දක්වා සියලුම ප්‍රශ්න පත්‍ර,
කෙටි සටහන්, වැඩ පොත්, අතිරේක කියවීම් පොත්, සඟරා
සිංහල සහ ඉංග්‍රීසි මාධ්‍යයෙන් ගෙදරටම ගෙන්වා ගැනීමට

www.LOL.lk වෙබ් අඩවිය වෙත යන්න