

First Term Test - Grade 10 - 2020

Western Music - I

Name/ Index No:

Times - 01 hour

- Answer all questions.

-

- (1) $\frac{1}{8}$ (2) $\frac{1}{4}$ (3) $\frac{1}{16}$ (4) $\frac{1}{32}$



- (1) viola (2) violin (3) cello (4) Bassoon

- (1) Mediant (2) Ga  (3) Mi  (4) Pa

- (1) Mozart : Don Giovanni (2) Haydn : surprise symphony
 (3) Chopin : Waltz in D flat (4) Wagner : Bridal chorus



- (1) GDAE (2) CGDA (3) GCAE (4) ADGC

- (1) C double flat (2) A flat (3) A double sharp (4) B sharp

- (1) Daula (2) Maddala (3) Yak bera (4) Bummadiya

-
- Handwritten musical notation for the first system of 'The Rose Tree'. The notation is on a five-line staff with a treble clef. The time signature is 6/8. The melody consists of the following notes: G4 (quarter), A4 (quarter), B4 (quarter), C5 (quarter), B4 (quarter), A4 (quarter), G4 (quarter), F#4 (quarter), E4 (quarter), D4 (half). The system ends with a double bar line.

- 10) Which of the following is the relative minor of G flat major
 (1) B flat minor (2) E flat minor (3) A flat minor (4) G minor
- 11) Which of the following would be the interval between B and G
 (1) Major 6th (2) Augmented 4th (3) Minor 6th (4) Diminished 7th
- 12) In which of the following periods of western music history would years 1600-1750 fall
 (1) classical (2) Baroque (3) Romantic (4) Modern
- 13) Minor triad consists of
 (1) Major 3rd, Major 3rd (2) Minor 3rd, perfect 5th
 (3) Major 3rd, Augmented 5th (4) Minor 3rd, Diminished 5th
- 14) Which of the following are known as Achala Swara
 (1) Sa, Pa (2) Sa, Re (3) Sa, Ga (4) Ma, Ga
- 15) Which of the following is the higher tetrachord of G major
 (1) F[#] G A B (2) D E F[#] G (3) B^b C D E (4) A B C[#] D[#]
- 16) Which of these is not an ornament ?
 (1) Turn (2) Mordent (3) Rondo (4) Arpeggio
- 17) Instrument used to check the pitch is
 (1) Metronome (2) Bell (3) Tuning fork (4) Violin
- 18) Sri sangabo is a
 (1) Nadagam (2) Nurthi (3) Raga (4) vanna
- 19) Episodes are found in
 (1) Sonata form (2) Ternary form (3) Binary form (4) all of these
- 20) Which bird call like a laugh descending chromatically?
 (1) king fisher (2) Grackle (3) koel (4) shama
- 21) This is indicate by a vertical line drawn across the stave
 (1) sharp (2) Bar line (3) Middle C (4) Natural
- 22) Which animal is depicted in the Mayura Vannama
 (1) Elephant (2) Swan (3) Eagle (4) Peacock
- 23) Name a percussion instrument which is clashed together
 (1) Cymbals (2) Triangle (3) Drum (4) Tublar bells

- 24) When a sharp is placed before a note
- (1) It raises a note by one semitone (2) It restores it to its original pitch
- (3) It raises a note by one tone (4) It lowers a note by one semitone
- 25) Which of the following will best describe "Chamber music"
- (1) Symphony (2) Song recital
- (3) Piano sonata (4) Piano trio
- 26) Tchaikovsky composed
- (1) 1812 overture (2) Bolero (3) Moon light (4) fire work
- 27) Which of the following has the same meaning as 'Ad libitum'
- (1) Adagio (2) A capella (3) A tempo (4) A piacere
- 28) Which of the following is used to decorate a melody
- (1) Trill (2) slur (3) phrase (4) candense
- 29) Which of the following is half the value of $\frac{6}{4}$?
- (1) $\frac{3}{2}$ (2) $\frac{3}{8}$ (3) $\frac{6}{8}$ (4) $\frac{6}{16}$
- 30) How would you describe this triad
- (1) Major (2) Minor (3) Diminished (4) Augmented
- 
- 31) The Portuguese introduced to Sri Lanka
- (1) Kaffringha (2) Rumba (3) Sinhala song (4) Plugs
- 32) Which of the following rhythm suits Sri Lankan National Anthem
- (1) Simple duple (2) Compound duple (3) Simple triple (4) Compound triple
- 33)  is the sign for
- (1) Cresendo (2) Accent (3) Decresendo (4) Diminuendo
- 34) Which two composers belong to the same period.
- (1) Bach, Haydn (2) Schuman, Schubert (3) Mozart, Handel (4) Bach, Ravel
- 35) Which of the following suits a group of five performers
- (1) Sextet (2) Octet (3) Quintet (4) Quartet
- 36) A whole bar of silence in 4 time is
- (1) Semibreve (2) Minim (3) Semi quaver (4) Breve

- 37) The 2nd leger line above the staff of the F Clef is,
(1) C (2) E (3) A (4) F
- 38) Which composer connects the classical period with the Romantic
(1) Chopin (2) Beethoven (3) Haydn (4) Mozart
- 39) Any sharps and flats occurring in a piece other than a key signature are called
(1) Natural (2) Accidentals (3) Slurs (4) Time signature
- 40) Which of the following is the example of "programme music"
(1) Moonlight sonata (2) Sonata in C (3) Farewell symphony (4) 1812 Overture

NWP EXAM



Provincial Department of Education - NWP

80 S I

පළමු වාර පරීක්ෂණය - 10 ශ්‍රේණිය - 2020

First Term Test - Grade 10 - 2020

Western Music - II

Name/ Index No:

Times - 02 hours

- Answer question number 01 and 04 others. (All five questions.)

01) study the given piece of music and answer the Question given below.

Bourrée

Moderato [$\text{♩} = c.88$]

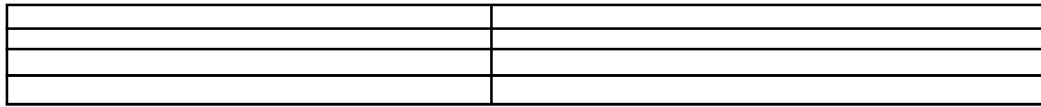
MOZART

The musical score for 'Bourrée' by Mozart is presented in two systems. The first system contains measures 1 through 4, and the second system contains measures 5 through 8. The music is written for piano in G major (one sharp) and 3/4 time. The tempo is marked 'Moderato' with a quarter note equal to approximately 88 beats per minute. The score includes various musical notations such as fingerings (e.g., 1, 4, 2, 4, 1, 3, 1, 2, 3, 4, 1, 2, 3, 4, 5), dynamics (mf, f, dim.), and articulation marks (accents, slurs). The piece concludes with a repeat sign in the final measure.

- (1) What is the title of this piece?
- (2) At (a) write the lowest note to the extract
- (3) At (b) write its enharmonic equivalent

(a)

(b)




- (4) In what key is the given piece of music
- (5) Name the Interval of the first two notes in the right hand
- (6) What is the term used to indicate the speed of the music?
- (7) Give the English meaning of the above term
- (8) What does time signature indicate?
- (9) To which period does this piece belong?
- (10) What is the Nationality of this composer?

(12 marks)

(02) Write the following scales as required, Mark semitones by stars.

- (1) The harmonic minor scale ascending having a key signature of two flats. Use the F clef and write in crochets.



(04 marks)

- (2) The Major Scale of B^b major descending without key signature in minims, use the alto clef.



(04 marks)

- (3) Add necessary accidentals to make the following scale of A melodic minor.




(04 marks)

(03) (1) Convert the following melody in to oriental notation.



(1/2 x 10 = 5 marks)

- (2) Write the key signature and Tonic chord.




D major

C major

B major


(1 x 3 = 3 marks)

- (3) Complete each of these bars with rests.



(2x2 = 4 marks)

- (04) (1) Write a note above the given note to form the required interval.




Minor 3rd

major 6th

Perfect 4th

(2x3 = 6 marks)

- (2) In the empty bar write the required notes.



Enharmonic
equivalent

Chromatic
semitone above

Diatonic semitone
below

(1x3 = 3 marks)

- (3) Match column 'B' with column 'A'

'A'

'B'

- (1) viola
- (2) Trombone
- (3) Flute
- (4) Piccolo
- (5) Arco
- (6) Timpani

- (a) no reed
- (b) highest pitch
- (c) kettle Drum
- (d) music written in Alto clef
- (e) has a slide
- (f) with the bow

(1/2 x 6 = 3 marks)

- (05) (1) Composers and their works, select the suitable answer.

- (a) Haydn wrote 104
- (b) Bach did not write
- (c) Peter and the wolf was written by
- (d) Bach wrote Brandenburg concertos.
(operas/ six/ symphonies/ prokofiev/ twelve)

(1/2 x 4 = 2 marks)

- (2) Name the four main sections of the orchestra and name two instruments which belong to each category.

Sections of the orchestra	Instruments	
	(1)	(2)
(a)		
(b)		
(c)		
(d)		

(12 x 1/2 = 6 marks)

- (3) Write the Italian terms.

- (a) In a singing style
- (b) In time
- (c) Sweetly
- (d) forcing the tone

(1 x 4 = 4 marks)

- (6) (1) Select two and write brief account of the following Forms.

- (i) Simple Binary Form
- (ii) Ternary Form
- (iii) Rondo Form

(3 x 2 = 6 marks)

- (2) Explain two of the following

- (i) Room music (Chamber music)
- (ii) String family
- (iii) Baroque Period

(3 x 2 = 6 marks)

පළමු වාර පරීක්ෂණය - 10 ශ්‍රේණිය - 2020

First Term Test - Grade 10 - 2020


Western Music - I / II (Solution)

PART I

- | | | | |
|---------|---------|---------|---------|
| 01. (3) | 11. (3) | 21. (2) | 31. (1) |
| 02. (3) | 12. (2) | 22. (4) | 32. (1) |
| 03. (2) | 13. (2) | 23. (1) | 33. (2) |
| 04. (4) | 14. (1) | 24. (1) | 34. (2) |
| 05. (3) | 15. (2) | 25. (4) | 35. (3) |
| 06. (2) | 16. (3) | 26. (1) | 36. (4) |
| 07. (1) | 17. (3) | 27. (4) | 37. (1) |
| 08. (3) | 18. (2) | 28. (1) | 38. (2) |
| 09. (1) | 19. (2) | 29. (3) | 39. (2) |
| 10. (2) | 20. (1) | 30. (3) | 40. (4) |

PART II

01. (1) Bourree (1 mark)




(3)



(4 marks)

(03) (1)



(1/2 x 10 = 5 marks)

(2)




(1 x 3 = 3 marks)

(3)




(2 x 2 = 4 marks)

(04) (1)



(2 x 3 = 6 marks)

(2)



(1 x 3 = 3 marks)

(3)

- (i) d (iv) b
(ii) e (v) f
(iii) a (vi) c

(1/2 x 6 = 3 marks)

(05) (1)

- (a) symphonies
(b) operas
(c) prokofiev
(d) six

(1/2 x 4 = 2 marks)

(2)

(a)	Percussion	Timpani	Bassdrum	Cymbal	Gong
(b)	String	Violin	Viola	Cello	Double Bass
(c)	Woodwind	Flute	Clarinet	Oboe	Bassoon
(d)	Brasswind	Trumpet	Trombone	French Horn	Tuba

(1/2 x 12 = 6 marks)

(3)

- (a) Cantabile/ cantando
(b) A tempo
(c) Legato
(d) Forzando/ storzando

(1x4 = 4 marks)

(06) (1)

Give marks for sutabel description

(3 x 2 = 6 marks)

(2)

Give marks for sutabel description

(3 x 2 = 6 marks)