



තුන්වන වාර පරීක්ෂණය - 08 ශ්‍රේණිය - 2023
Third Term Test - Grade 08 - 2023

WESTERN MUSIC

Time 2 Hours

Name / index Number :

PART 1

UNDERLINE THE CORRECT ANSWER

1. How would you describe the absence of frequency ?

a). Pitch	b). Noise
c). Tone	d). Silence

2. Who is known as the prince of concerto ?

a). Haydn	b). Beethoven
c). Mozart	d). Bach

3. A composition for three performers is known as,

a). Trio	b). Triplet
c). Quintet	d). Duet

4. Another name for ternary form is ?

a). ABACA form	b). AB form
c). Song form	d). Binary form

5. All Instruments of the Orchestra are generally tuned in

a). 440 Hz	b). 256 Hz
c). 512 Hz	d). 330 Hz

6. The most musical garden bird is






a). Shama	b). Magpie robin
c). Koel	d). Cock

7. Which key has F #, C # and G # as its key signature ?

a). A major	b). G major
c). D major	d). E major

8. Which of the following is the Enharmonic equivalent of F flat (F^b) ?

a). E sharp	b). G flat
c). E natural	d). G sharp

9. The classical period also known as.
- a). Vanniese
b). Polyphonic period
c). Comic period
d). Monophonic
10. The English meaning of Allegro is ?
- a). Slow
b). Fast
c). Lively
d). Smoothly
11. Which of the following is equal to 3 crotchets ?
- a). Minim
b). Dotted minim
c). Semibreve
d). None
12. Which drum is made out of clay ?
- a). Thammattama
b). Gataberaya
c). Bummediya
d). Udekkiya
13. Pizzicato, Arco associated with
- a). String Section
b). Wood wind section
c). Brasswind section
d). Percussion section
14. The technical name of the 4th degree of a scale is
- a). Dominant
b). Subdominant
c). Submediant
d). Tonic
15. Which of the following time signature for simple quadruple with crotchet beats ?
- a). $\frac{2}{4}$
b). $\frac{3}{4}$
c). $\frac{4}{8}$
d). C
16. Which of the following is a demisemi quaver rest ?
- a). 
b). 
c). 
d). 
17. The letter name of this note would be?
- a). MC
b). B flat
c). D sharp
d). D flat
- 
18. What is the interval between B^b - F ?
- a). Major 5th
b). Perfect 5th
c). Minor 7th
d). Perfect 7th
19. Which of the following instrument is known as the cinderella of the Orchestra ?
- a). Violin
b). Viola
c). Violin cello
d). Trumpot
20. The open string of the guitar is
- a). GDAEB
b). EABGDE
c). EADGBE
d). CEGBCE

1 x 20 = 20 Marks

PAPER II

Answer questions No: 1 and three Others on this paper itself.

The fly and the flea

- (i) What is the key of this extract ?.....
- (ii) What is the time Signature ?
- (iii) How many bars are there in this piece ?.....
- (iv) Circle the pair of tied note ?.....
- (v) What is the highest note in this piece ?
- (vi) Name the interval marked with “A”
- (vii) What is the lowest note in this extract ?
- (viii) How many dotted minims are there in this piece ?.....
- (ix) What rest mark is occur in this ?
- (x) Transpose bar 1 octave lower in to the bass clef ?

1 x 10 = 10 Marks

2. Write the following scales.

- i) D major scale ascending with key signature in crotchets. Use G clef. Mark semitones with slurs.

- ii) Write E^b major scale descending with out key Signature in quavers. Use F clef. mark semitones with slurs.

5 x 2 = 10 Marks


3. i) Name the following melodic intervals.



.....

02 Marks

ii) Write these notes as required



Diatonic Semitone
Below

Enharmonic
equivalent

Chromatic
Semitone above

3 x 2 = 6 Marks

iii) Name two Calypso Songs

a)

b)

02 Marks

4) i) Name the following notes with its letter name and value name.



..... (letter name)

..... (Value name)

a

b

c

06 Marks

ii) Name two non transposing string instruments.

a)

b)

iii) Name two composer in classical period

a)

b)

04 Marks



වයඹ පළාත් අධ්‍යාපන දෙපාර්තමේන්තුව
Provincial Department of Education - NWP

තුන්වන වාර පරීක්ෂණය - 08 ශ්‍රේණිය - 2023
Third Term Test - Grade 08 - 2023

WESTERN MUSIC

Answer

Part I

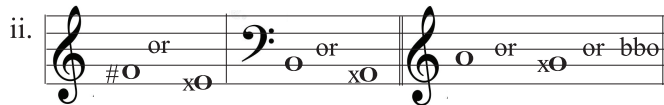
- | | | | |
|-------|--------|--------|--------|
| 1). d | 6). b | 11). b | 16). c |
| 2). c | 7). a | 12). c | 17). b |
| 3). a | 8). c | 13). a | 18). b |
| 4). c | 9). a | 14). b | 19). b |
| 5). a | 10). b | 15). d | 20). c |

Part II

- | | |
|---------------------------------------------|----------------------------|
| 01. 1. C major | 6. Perfect 5 th |
| 2. 3/4 time or three crotchet beats | 7. F |
| 3. 16 bars | 8. 10 |
| 4. last two bars (Should cover with circle) | 9. Crotchet rest |
| 5. C | 10. |



03. i. Major 3rd / perfect 5th



- iii. Banana boat song, comeback Lisa, Jamaican farewell Island in the sun or eny other calypso song.

04. i. letter name - A double sharp B Natural MC double flat
 Value name - Minim Quaver Semibreve
 (a) (b) (C)

- ii. violin, viola, violin cello
 F.J. Haydn, W.A. Mozart, L. V Beethoven



(8) WWW.PastPapers.WiKi (8)

Download Term Test Papers, Short Notes From One Place!



LOL.lk
BookStore

විභාග ඉලක්ක

පහසුවෙන් ජයගන්න

ඕනෑම පොතක් ඉක්මනින්
නිවසටම ගෙන්වා ගන්න



| කෙටි සටහන් | පසුගිය ප්‍රශ්න පත්‍ර | වැඩ පොත් | සඟරා | O/L ප්‍රශ්න පත්‍ර
| A/L ප්‍රශ්න පත්‍ර | අනුමාන ප්‍රශ්න පත්‍ර | අතිරේක කියවීම් පොත්
| School Book | ගුරු අත්පොත්



පෙර පාසලේ සිට උසස් පෙළ දක්වා සියලුම ප්‍රශ්න පත්‍ර,
කෙටි සටහන්, වැඩ පොත්, අතිරේක කියවීම් පොත්, සඟරා
සිංහල සහ ඉංග්‍රීසි මාධ්‍යයෙන් ගෙදරටම ගෙන්වා ගැනීමට

www.LOL.lk වෙබ් අඩවිය වෙත යන්න