



Royal College - Colombo 07

රාජකීය විද්‍යාලය - කොළඹ 07

Grade 6 – Second Term Test – July 2019

දෙවන වාර පරීක්ෂණය - 2019 ජූලි - 6 ශ්‍රේණිය

කාලය : පැය 1
Time : 1 hours

Western Music

Name :- Grade : - Index number:-.....

Part I

Underline the correct answer.

01. Which of the following is connected to Christians?

- (i) Carols (ii) Pirith (iii) Quran (iv) Bhajan

02. Which off the following is not a natural sound?

- (i) Rain drops are falling (ii) Sound of waterfall on the ground
(iii) Sound of crackers (iv) A frog croaking

03. How many lines are there in a stave?

- (i) 11 (ii) 10 (iii) 5 (iv) 4

04. Another name for Bass clef?

- (i) Treble (ii) G clef (iii) E clef (iv) F clef

05. The second space in the G clef is?

- (i) G (ii) A (iii) C (iv) B

06. Which of these is incorrectly written?

- (i) (ii) (iii) (iv)

07. Which of the following drum is played on New Year Festival?

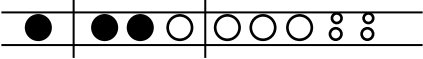







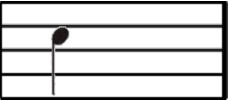

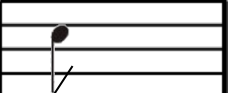
- (i) Daula (ii) Getaberaya
(iii) Hand Rabana (iv) Bench Rabana

08. Keys of the Piano are?

- (i) Black & White (ii) Ash colour
(iii) Black colour (iv) White colour

09. The great staff middle C is found in the

- (i) Below the great stave (ii) Above the great stave
(iii) 3rd space in the stave (iv) Centre of the great stave

10. The given note is a? 
- (i) A (ii) B (iii) C (iv) D
11. Underline the word which is hidden. 
- (i) DEAF (ii) DECF (iii) BEAF (iv) DEED
12. Which of the following is a crotchet rest
- (i)  (ii) 
- (iii)  (iv) 
13. Which instrument is played, only with a metal beater?
- (i) Tambourine (ii) Side Drum (iii) Cymbal (iv) Triangle
14. Which of the following is a new music composer?
- (i) J. S. Bach (ii) J. F. Handel (iii) Scott Joplin (iv) Mozart
15. Which of the following word would suite the mood of feeling in Pink Panther?
- (i) Happy (ii) Sad (iii) Exciting (iv) Calm
16. The given note is 
- (i) Middle C (ii) D (iii) C (iv) E
17. A silent is indicated by a
- (i) Rest (ii) Note (iii) Sound (iv) Bar Line
18. Which of the following time signature is in Duple time?
- (i) $\frac{3}{4}$ (ii) $\frac{4}{4}$ (iii) $\frac{2}{4}$ (iv) $\frac{3}{2}$
19. Independence day is a
- (i) Social Function (ii) Religious Function
- (iii) School Function (iv) National Function
20. The shortest value of the following notes is?
- (i)  (ii) 
- (iii)  (iv) 

Part II

➤ Answer question number one and two others.

01. Study the given passages of music and answer the questions. (10 marks)



1. How many bars are there in this melody?
2. How many Crotchets are there in this melody?.....
3. Which bar has minim rest?.....
4. Circle the key signature.....
5. Name the note which appears only ones.....
6. Explain the time signature of the given melody.....
7. Write the number of the bar where the double bar line is written.....
8. Name one instrument that can play the given melody?.....
9. The music is written in the treble clef, write another name for this clef.....
10. Write the time value of the last note in bar 8th

02. Write the following notes as required. (5 marks)

(a)

B o n a	E i n a	G o n a	E i n a	D o n a line
line as a	space as	line as	space as	as a
crotchets	a quaver	a minim	a semibreve	crotchet

(b) Add bar lines to the following (2 marks)




(c) Mark the given notes in the key board (3 marks)

i)

ii)

iii)

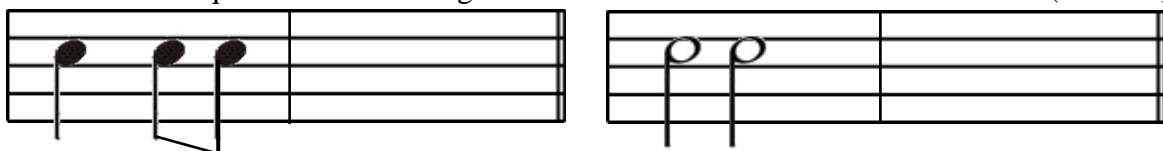
03. (a) Write the time value and time name of the following notes and rests. (4 marks)



Time Name _____

Time value _____

(b) Write one note equal in value to the given notes. (2 marks)



(c) Name the following notes (2 marks)

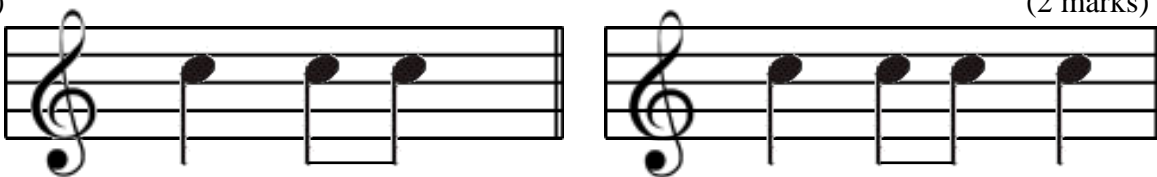


(d) Fill in the blanks. (2 marks)

1. is used to separate the beats. (Double bar line/Bar line)
2. Notes are written on a (stave/clef)
3. The middle C is written In the bass clef (above/below)
4. clef begins on the 2nd line of the stave (treble/ bass)

04. Add correct time signature to the following

(a) (2 marks)



(b) Write 2 man made sounds and draw one picture (2 marks)

- (i) (ii)

(c) Write 2 pleasant sounds and draw one picture. (2 marks)

- (i) (ii)

(d) Name and draw, two Sri Lankan drums and two indefinite pitch instruments.

- (i) (ii)

- (i) (ii)

(4 marks)