



# JAFFNA HINDU COLLEGE

First Term Exam - 2023

Grade :- 6

Geography

Time : 2.00 Hours

Name / Index No : .....

## Part - I

### Underline the most suitable answer

01) The place which is considered to receive the important basic education.

- 1) School                      2) preschool                      3) family                      4) temple

02) The Divisional secretariat division.

- 1) Jaffna                      2) Nallur                      3) Manipay                      4) Island

03) The smallest administrative division. Where your school is located.

- 1) Gramaniladhari Division                      2) District  
3) Province                      4) Divisional secretariat Division

04) The administrative division which includes two or more than two districts.

- 1) +---+---+                      2) + · + · +                      3) - · - · -                      4) - ... - ... - ...

05) The district which is one of the north western Province.

- 1) Anuradhapura                      2) Polannaruwa                      3) Vavuniya                      4) Puttalam

### Match with the suitable answer.

- |                                   |                        |
|-----------------------------------|------------------------|
| 06) Galle                         | i. Colombo             |
| 07) Gramaniladhari Division J/101 | ii. Polan              |
| 08) Large Province                | iii. Southern Province |
| 09) Direction                     | iv. JHC                |
| 10) Small District                | v. Northern Province   |

### Select suitable answer for Question NO.11 - 15 from the words given below.

weather. climate. rain, north, temperature, north east, sun, Ampara, compass Mannar

- 11) The symbol ↗ indicates the direction of .....
- 12) ..... is one of the districts in Eastern Province.
- 13) In the ancient period, ..... is used to identify the direction.
- 14) ..... is considered as main element of weather.
- 15) The condition of the atmosphere that prevails for a particular period of time in a particular area is called.....

**Fill in the blanks with suitable answers**

- 16) ..... is indicated when the plan is drawn.  
17) The Department of Meteorology is located at .....  
18) Dry weather condition is made by .....  
19) ..... is measured by the unit of millimeters.  
20) Electric equipment should be used safely during .....

(20 x 2 = 40 marks)


**Part - II**

**Answer all questions**

(01) 01. Give the symbols of the following administrative divisions of your country.

1. District :-  
2. Province :-

02. Write the administrative divisions and their names.



03. The schools are located in different environments. Mention such these four environments.

(3 x 4 = 12 marks)

(02) 01. Give two districts below mentioned each province.

1. Western Province - .....  
2. Central Province - .....

02. In which Province you live?

03. Write three Districts which belong to your province.

04. Write the names of the province which contains below mentioned districts.

- i) Ratnapura ..... ii) Monaragala .....  
iii) Matara ..... iv) Anurathapura .....

(3 x 4 = 12 marks)

(03) 01. Indicate the following features from the sketch map of the school.

- 1. G - .....
- 2. W - .....
- 3. C - .....
- 4. O - .....

02. when you stand facing the rising sun, stretching your hands then

01. your right hand points to the direction of the

.....

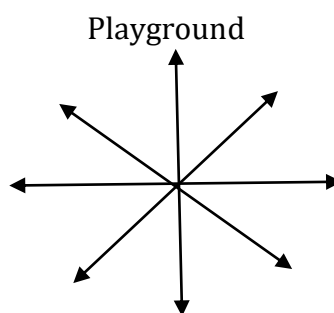
02. your left hand points to the direction of the

.....

03. Indicate the letters which shows the places as given direction.

Eg :- play ground - North

- 1. Kovil – southwest
- 2. Bank – southeast
- 3. school – west
- 4. market – north west



(3 x 4 = 12 marks)

(04) 01. Mention four weather elements which you observe in the environment.

.....  
.....

02. Give four ways to get the weather information.

.....  
.....  
.....  
.....

03. Give four advantages of knowing the weather conditions in your surroundings

.....  
.....  
.....  
.....

(3 x 4 = 12 marks)

(05) 01. Mention four people who should know the weather information.

02. Mention the weather element equipment which are used to measure undermentioned units.

- |         |   |       |
|---------|---|-------|
| 1. Km/H | - | ..... |
| 2. MM   | - | ..... |
| 3. °C   | - | ..... |
| 4. °F   | - | ..... |

03. Give four advantages of the rainfalls.

.....

.....

.....

.....

.....

.....

.....

(3 x 4= 12 marks)





**LOL.Lk**  
Learn Ordinary Level

# විභාග ඉලක්ක පහසුවෙන් ජයගන්න පසුගිය විභාග ප්‍රශ්න පත්‍ර



- Past Papers
  - Model Papers
  - Resource Books
- for G.C.E O/L and A/L Exams



විභාග ඉලක්ක ජයගන්න  
**Knowledge Bank**



**Master Guide**

**WWW.LOL.LK**



**CASH  
ON**

**DELIVERY**



Whatsapp contact  
**+94 71 777 4440**

Website  
**www.lol.lk**



**Order via  
WhatsApp**

**071 777 4440**



Grade 1

Grade 2

Grade 3

Grade 4

Grade 5

Grade 6

Grade 7

Grade 8

Grade 9

Grade 10

Grade 11

G.C.E O/L

Grade 12

Grade 13

G.C.E A/L

GOVERNMENT EXAMS

## O/L Past Paper Books

English Medium

Sinhala Medium

View All



O/L English language Past Paper Book – Master Guide

රු 900.00

or 3 X රු300.00 with *mintpay*



O/L Sinhala Language Past Paper Book – Master Guide

රු 850.00

or 3 X රු283.33 with *mintpay*



O/L History Past Paper Book – Master Guide

රු 900.00

or 3 X රු300.00 with *mintpay*



O/L Mathematics Past Paper Book – Master Guide

රු 850.00

or 3 X රු283.33 with *mintpay*



O/L Science Past Paper Book – Master Guide

රු 850.00

or 3 X රු283.33 with *mintpay*



O/L Buddhism Past Paper Book – Master Guide

රු 750.00

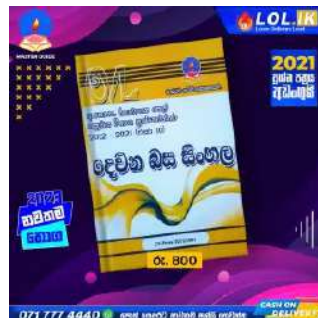
or 3 X රු250.00 with *mintpay*



O/L Second Language Tamil Past Paper Book – Master Guide

රු 700.00


or 3 X රු233.33 with *mintpay*



O/L Second Language Sinhala Past Paper Book – Master Guide

රු 800.00

or 3 X රු266.67 with *mintpay*



O/L Design And Mechanical Technology Past Paper Book – Master Guide

රු 650.00

or 3 X රු216.67 with *mintpay*

