



Richmond College – Galle.

Second Term Test – 2019

Western Music



Grade 06

Time : 2 hrs

Name : Index No : Class :

Part I

Write the answers on the paper itself.

- Underline the correct answer.

1) A man made sound is,

- a) Sound of a frog
- b) Sound of a bee

- c) Sound of Thunder
- d) Sound of a mobile phone

2) The correct musical alphabet is,

- a) A, B, C, D
- b) C, D, E, F, G, A, B

- c) A, B, C, D, E, F, G
- d) C, D, E, F

3) "ගණිත මිණිත නෙක ශිල්ප කලා" Words are taken from the,

- a) Folk song
- b) Bhakthi Gee


- c) National Anthem
- d) School Anthem

4) "දෙවොල් බෙරය" is another name for,

- a) Dauvla
- b) Thammattama

- c) Geta Beraya
- d) Yak Beraya

5) Which of the following note is the highest pitched note?



6) Which of the following is a social function?

- a) Birthday party
- b) Parents Meeting

- c) School Assembly
- d) Vesak

7) Third space of G clef would be,

a) B

b) C

c) E

d) D

8) The note which has 2 counts would be,

a) Minim

c) Semibreve

b) Quaver

d) Crotchet

9) Another name for bass clef would be,

a) G Clef

c) C Clef

b) Treble clef

d) F clef

10) How many quavers need to make one minim?

a) 6

b) 2

c) 4

d) 8

11) Which of the following word is hidden with notes?



a) CAGE

b) FADE

c) CAFÉ

d) FACE

12) Which of the following is indicated by a rest?

a) Melody

c) Noise

b) Silence

d) Sound

13) The rhythm for two time music would be,

a) Duple

c) Quadruple

b) Triple

d) Rhythm

14) A note with a head, stem and a tail would be,

a) Minim

c) Crotchet

b) Quaver

d) Semibreve

15) Which of the following is the correctly written rest?



(a)

(b)

(c)

(d)

16) The longest note of the following is?



(a)



(b)



(c)



(d)

17) The number of spaces in Great staff will be,

a) 5

b) 10

c) 11

d) 4

18) To divide bars in music, we use,

a) Notes

c) Double bar lines

b) Bar lines

d) Stems

19) "Twinkle Twinkle little star" is a,


a) Dance

c) Carol

b) Nursery Rhyme

d) March

20) Which of the following note is D?



(a)

(b)

(c)

(d)

(20 marks)

Paper II

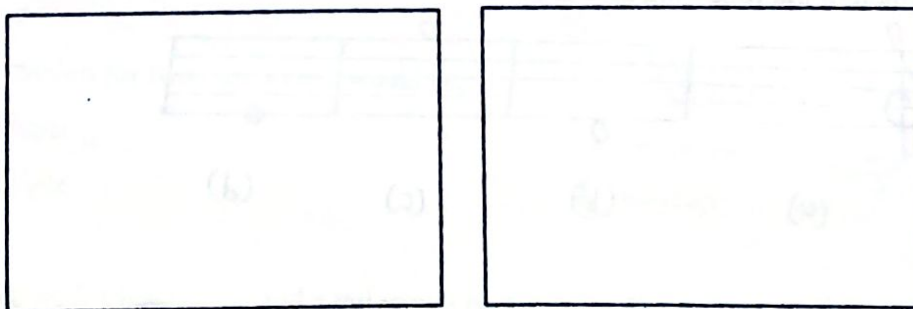
- Answer question No. 1 which is compulsory & two others.

1) (a) State the name of the following signs & symbols on the given space. (4m)



(b) Draw two social events and name them.

(4m)



(c) Where would you hear the following? (Name a function)


(2m)

Jayamangala Gatha -

National Anthem -

(10 marks)

- 2) (a) Write the letter name of the following notes. (4m)



- (b) Draw a suitable clef to make the given letter names correct. (4m)



C

E

G

B

- (c) Complete the missing lines of the given verse of your school anthem. (2m)

Richmond expects that you will ever play the game.

.....

Be a man and honor Richmond by upholding right.

(10 marks)

- 3) (a) Complete the following grid by filling the blanks. (6m)

<u>Name</u>	<u>Note</u>	<u>Rest</u>	<u>No. of Counts</u>
	O		
		7	
Minim			
			1 Count

- (b) Make short meaningful sentences to represent 5 line & 4 spaces of treble & bass clefs. (4m)

- Treble clef 5 lines :
- Treble clef 4 spaces :
- Bass clef 5 lines :
- Bass clef 4 spaces :

(10 marks)




4) a) State whether the following are pleasant or unpleasant. (5m)

- i) Rustling of leaves :
- ii) A bomb blast :
- iii) A frog croaking :
- iv) Thundering :
- v) Birds chirping :

b) Describe the following time signatures. (2m)

- i) $\frac{3}{4}$:
- ii) $\frac{2}{4}$:

c) Add bar lines according to the given time signatures. (2m)

- i) $\frac{2}{4}$: 
- ii) $\frac{3}{4}$: 
- iii) $\frac{2}{4}$: 

(10 marks)