

සියලුම හිමිකම් ඇවිරිණි Department of Education - Western Province	විජ්‍යාතිර පළාත් අධ්‍යාපන දෙපාර්තමේන්තුව மேல் மாகாணக் கல்வித் திணைக்களம் Department of Education - Western Province	සියලුම හිමිකම් ඇවිරිණි Department of Education - Western Province
වර්ෂ අවසාන ඇගයීම ஆண்டிறுதி மதிப்பீடு - 2018 Year End Evaluation		
ශ්‍රේණිය } 07 கிராம் }	විෂයය } பாடம் } Western Music Subject }	පත්‍රය } வினாத்தாள் } I, II Paper }
		කාලය } 02 Hours காலம் } Time }

Name : Index No :

Part I

Underline the correct answer.

1. A definite pitched Percussion instrument is

- i. Cymbal ii. Glockenspiel iii. Side drum iv. Bass drum

2. 'Are you sleeping' is well known as a i. Round ii. Baila iii. Virindu iv. Jana kavi

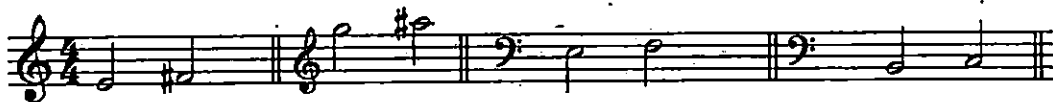
3. A Triad consists of notes. i. 2 ii. 3 iii. 4 iv. 5

4. 'Ray' is equal to i. Sa ii. Ri iii. Ga iv. Ma



5. The distance between the given two notes are i. 2 ii. 3 iii. 4 iv. 5

6. Which of the following has a Tone



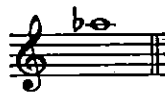
- i. ii. iii. iv.

7. A Waltz is a dance intime. i. Duple ii. Triple iii. Quadruple iv. March

8. A 'Duet' is a performance by players. i. 3 ii. 1 iii. 4 iv. 2

9. Nadeshwaran is a Wind instrument played in i. Temple ii. Kovil iii. Church iv. Mosque

10. දුර ජන තැනිතලා is sung at i. Wesak ii. Posen iii. Christmas iv. Ramasan




11. Which of the following is the correct letter name

- i. C flat ii. A flat iii. E flat iv. F flat

12. Which two composers were born in the same year

- i. Bach – Handel ii. Bach – Beethoven iii. Handel – Mozart iv. Mozart – Bach
13. Which of the following is the correctly written Semj Brevc rest.



- i. ii. iii. iv.


14. The given note is




- i. ii. iii. iv.

15. The time signature suitable for a 'March' is

- i. 3/4 ii. 2/4 iii. 4/2 iv. 3/2

16.  is i. B ii. C iii. D iv. E

17.  is i. B ii. A iii. E iv. G

Mark ✓ or x.

18. There are 5 Tetrachords in a Scale ()
 19. A phrase is a musical sentence ()
 20. The Pitch of a note is determined by its Frequency. ()


20x2= 40 marks

Part II
Answer 05 questions


(12x5=60)

01. Write the following scales as required.


i. Scale of G major ,ascending in Semibreves ,with key signature . (5 marks)



ii. F major scale ; ascending and descending , in Semibreves without key signature.



iii. Write the key signatures as following (3 marks)




G major

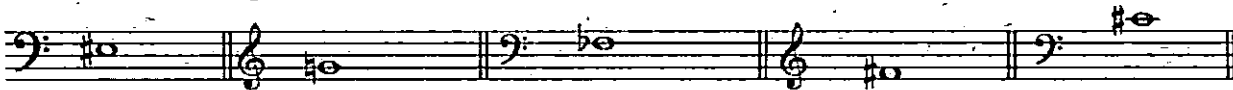
F major

C Major

02.i. Write the distance of the Interval given below.(4 marks)




ii. Name the following notes.(5 marks)



iii. Put the time signature at the correct place (3 marks)



03.i. Name the following Triads.(5 marks)



ii. Name the difference of the following notes as TONES or SEMITONES. (5 marks)



iii. How many sections are there in Binary Form (2 marks)

04. Look at the following music piece & answer the questions below.

a.



i. How many bars are there in the melody

ii. In which key is the music written

iii. Write the Italian term for the following dynamic marks.

mp p mf

iv. How many dotted minims are there in the music

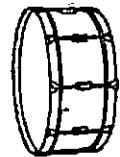
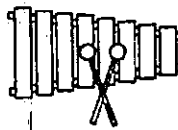
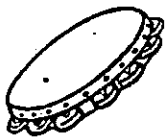
v. Describe the Time signature

- vi. Write the meanings of >
- vii. Write the number of Phrases are there in the music
- viii. Write the letter name of the bracketed note.....
- ix. Name another instrument which the melody can play
- b. Transpose the bars 5 ,6 & 7 one octave higher.



05. Name the following Instruments & categorize the instrument as **Definite** or **Indefinite** pitch

(Triangle , Kettle drum , Side drum , Bass drum , Glockenspiel , Tambourine)



Name _____
 Indefinite/Definite _____

06.i. Write the nationalities of the following composers.

J . S Bach G . F Handel D Scarlatti

ii. Write the composer of the following compositions.

Work	Composer
1. Fire work music	
2. Harmonious Blacksmith	
3. Messiah	
4. 48 Preludes & Fugues	
5. 06 Brandenburg Concertos	
6. Minuet in G	

iii. Name 3 instruments used during the Baroque period

බස්නාහිර පළාත් අධ්‍යාපන දෙපාර්තමේන්තුව Department of Education - Western Province	බස්නාහිර පළාත් අධ්‍යාපන දෙපාර්තමේන්තුව மேல் மாகாணக் கல்வித் திணைக்களம் Department of Education - Western Province	දෙපාර්තමේන්තුව Department of Education - Western Province
වර්ෂ අවසාන ඇගයීම ஆண்டிறுதி மதிப்பீடு - 2018 Year-End Evaluation		
ශ්‍රේණිය } 07 Grade }	විෂයය } Western Music Subject }	

Practical Test

- 1) Performance (40 marks)
 - Recorder/ Piano piece - 15 marks
 - Sight reading (Within 5 notes range, from G to D) - 6 marks
 - Piano scales (C major) - 4 marks
 - Song - 15 marks

2. Practical Activity (20 marks)
 - Sing the scale on a given note - 5 marks
 - Sing a 3rd, 5th or 8th above the given note - 5 marks
 - Listen & sing (two bars) - 5 marks
 - Listen & clap (two bars) - 5 marks

3. Listening - 40 marks (2x20)
 - i. Religious music

	Buddhist	Hindu	Christian	Islam
1				
2				
3				
4				

ii. Identify Sri Lankan music

	Baila	Viridu
1.		
2.		

iii. Identify the time

	Duple	Triple	Quadruple
1			
2			
3			
4			

iv. Identify the following intervals as

	Harmonic Interval	Melodic Interval
1		
2		

v. Identify & write the following compositions.

	Minuet in G by Bach	Prelude no 01	Halleluiah chorus	A March
1.				
2.				
3.				
4.				

බස්නාහිර පළාත් අධ්‍යාපන දෙපාර්තමේන්තුව
Department of Education - Western Province
බස්නාහිර පළාත් අධ්‍යාපන දෙපාර්තමේන්තුව
Department of Education - Western Province
බස්නාහිර පළාත් අධ්‍යාපන දෙපාර්තමේන්තුව
Department of Education - Western Province

බස්නාහිර පළාත් අධ්‍යාපන දෙපාර්තමේන්තුව
மேல் மாகாணக் கல்வித் திணைக்களம்
Department of Education - Western Province

බස්නාහිර පළාත් අධ්‍යාපන දෙපාර්තමේන්තුව
Department of Education - Western Province
බස්නාහිර පළාත් අධ්‍යාපන දෙපාර්තමේන්තුව
Department of Education - Western Province
බස්නාහිර පළාත් අධ්‍යාපන දෙපාර්තමේන්තුව
Department of Education - Western Province

වර්ෂ අවසාන ඇගයීම
ஆண்டிறுதி மதிப்பீடு - 2018
Year End Evaluation

ශ්‍රේණිය } 07
தரம் }
Grade }

විෂයය }
பிரிவு } Western Music
Subject }

පත්‍රය } I, II
வினாத்தாள் }
Paper }

Answer


Answers -Grade 7

Part I

1.2	2.1	3.2	4.2	5.4	6.1	7.2	8.4	9.2	10.2
11.2	12.1	13.1	14.4	15.2	16.8	17.4	18.X	19.√	20.√

Part II

01. i.



iii



i.

02.i.5 th , 4 th , 6 th , 2 nd ii.E sharp , G natural , F flat , F sharp , m.c sharp

iii.2/4, 4/4, 3/2 03.C major , F major , G major , C major , F major ii.semintone ,semitone ,semitone,tone ,semi tone iii. 2 sections

04.15 ii.F major iii.Mezzo piano ,Piano ,Mezzo forte iv.5 v.3 crotchets in a bar vi accentvii.7



viiiB flat ix.Recorder , Piano , Melodica ix

05.Tambourine – Indefinite pitch , Triangle – Indefinte pitch ,Side drum – Indefinite pitch
Glockenspiel – Definite pitch , Kettle drum – definite pitch ,Bass drum – definite.pitch

06.German , German , Italian

ii.

Work	Composer
1.Fire work music	G F Handel
2.Harmonious Blacksmith	G F Handel
3.Messiah	G F Handel
4.48 Preludes & Fugues	JS Bach
5.06 Brandenburg Concertos	JS Bach
6.Minuet in G	JS Bach

iii. Harpsichord , Clavichord . Violin etc