



G/ Southlands College

ගා/සවුත්ලන්ඩ්ස් විද්‍යාලය

15



3rd Term Test-2022

Western Music

Grade 7

Duration : 2 hours

Name:

Index No :

Part I

In each of the questions 1-40, pick one of the alternative (1),(2),(3),(4) which you consider is correct or most appropriate.

01. Which is a pleasant sound?

- i. Scraping coconuts ii. Gun fire
iii. Train horn sound iv. Rustling of leaves

02. How many spaces for the great staff?

- i. 11 ii. 10 iii. 9 iv. 12

03. The 7th note of G major scale is,

- i. G# ii. F# iii. A# iv. C#

04. The correct way to describe this time signature is, 2/4

- i. Two minim beats in a bar ii. Two quaver beats in a bar
iii. Two crotchet beats in a bar iv. Two Semi quaver beats in a bar

05. Which of the following bird has singing tone?

- i. Mayna ii. Magpie Robin iii. Kingfisher iv. Crow

06. Suitable time signature for this rhythm patten is,



- i) 2/4 ii. 3/4 iii. 4/4 iv. 2/2

07. A religious function that fails in the month of June?

- i. Wesak ii. Poson iii. Deepawali iv. Christmas

08. Bajan Gee are sing by,

- i. Hindus ii. Christians iii. Buddhists iv. Muslims

09. දඩි බිඩි ගඟ කරනා වැඩ රට වටියේ is a,
රට වෙඩි දමා කඩන කළු ගල් කැටියේ

- i. Pathal kavi ii. Boat song iii. Onchili waram iv. Nelum kavi

10. How many performers are involved in a **duet** ?

- i. 5 ii. 2 iii. 3 iv. 4

11. Halleluiah Chorus is composed by,

- i. G. F Handel ii. Chopin iii. Antonio Vivaldi iv. L. V Beethoven

12. The 48 Preludes and Fugues are composed by,

- i. J.S Bach ii. W.A Mozart iii. L.V Beethoven iv. F.J Haydn

13. How many semi quavers in this Rhythm pattern?



- i. 32 ii. 24 iii. 28 iv. 16

14. What is odd one out?

- i. The Symphony Orchestra ii. National youth Orchestra
iii. The Krasna Orchestra iv. Five group Orchestra

15. What does  mean?

- i. Gradually getting softer ii. . Gradually getting louder
iii. Moderately loud iv. Moderately soft

16. 7th degree of the scale should be,

- i. Tonic ii. Mediant iii. Leading note iv. Dominant

17. The highness and lowness of sound is called ,

- i. Harmony ii. Pitch iii. Triad iv. Octave

18. The instrument used mostly during the Baroque period was ,

- i. Glockenspiel ii. Harpsichord iii. Organ iv. Flavichord

19. Which of the following describes performance by a small group of performance?

- i. Orchestral music ii. Chamber music iii. Calipso music iv. Jazz music

20. 4/4 time which has 4 crotchet 4 crotchet beats is also indicated as **C** meaning,

- i. Common time ii. Quarter time iii. Crotchet time iv. Alla breave

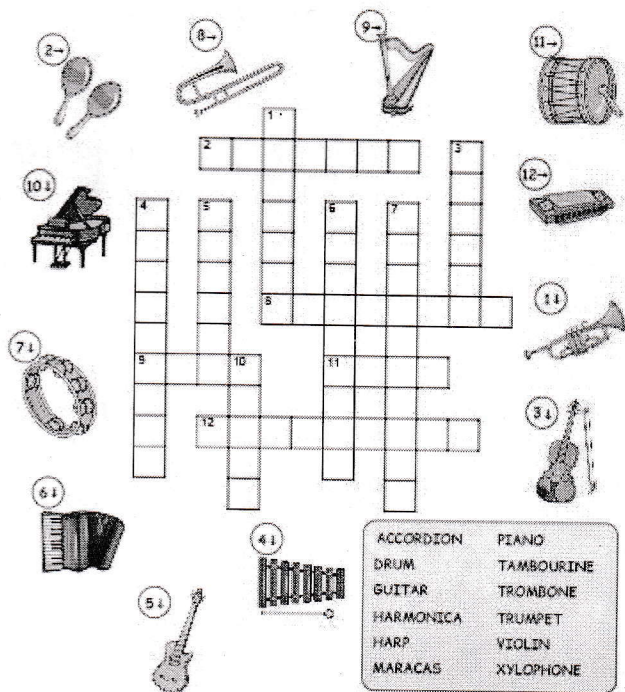
Part II

Answer All Questions.


01. Name the following notes. (Marks 10)













02) i) Fill in the crossword puzzle grid with the name of each musical instrument following the numbers and direction indicated. (Marks 6)



ii. Complete the following music notes tree. (Marks 4)



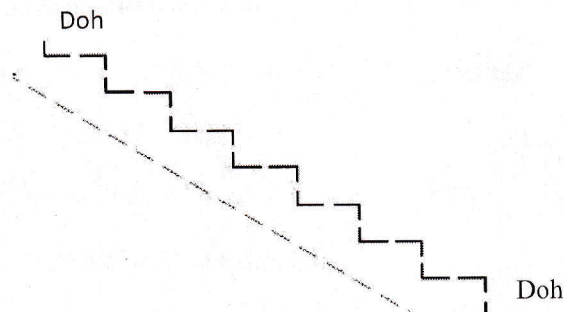
03.i. Match each rest with its relative note by putting the letter next to the rest in the space provided. (Marks 5)

1. 	a. 
2. 	b. 
3. 	c. 
4. 	d. 
5. 	e. 

ii. Write **true** or **false** in the next sentences. (Marks 5)


- a) Beethoven, Bach and Vivaldi were the most important composers in the baroque period.
- b) The piano was the most important instrument.
- c) The baroque period started in 20th century.
- d) In Baroque music, They used extreme of dynamics like *pp* or *ff*
- e) Poliphonic is use different melodic lines or voices in a composition.


04.i. Fill in the blanks. (Marks 6)




ii. Put stem, Tails and colour the notes to make these notes correct. (Marks 4)

a) 
Minim

b) 
Quaver

c) 
Crotchet

d) 
Semi Quaver

05. Fill in the blanks with the given words.(Marks 10)

1. The English meaning of **forte** means.....2.is an definite pitch percussion instrument.3. Pahatha rata beraya is also known as..... 4.is a religious story ,play or sung to music by a choir. 5. Minuet is abeat French country dance. 6. A piano duet is played byperformers on the piano using four hands. 7.....is a string family instrument. 8.....is a indefinite pitch percussion instrument.9. In a time signature, the top figure indicate the10. In a time signature, the bottom figure indicate the

(type of note, Double Bass, Xylophone, Oratorio, 2, triangle, 3, loud, Yak beraya, number of beats in a bar)

06. Write short notes for **two** of these.(Marks 10)

J.S Bach ,G.F Handel, Baila, Folk songs, The String family

.....

.....

.....

.....

.....

.....

.....

.....





LOL.Lk
Learn Ordinary Level

විභාග ඉලක්ක පහසුවෙන් ජයගන්න පසුගිය විභාග ප්‍රශ්න පත්‍ර



- Past Papers
 - Model Papers
 - Resource Books
- for G.C.E O/L and A/L Exams



විභාග ඉලක්ක ජයගන්න
Knowledge Bank



Master Guide

WWW.LOL.LK



**CASH
ON**

DELIVERY



Whatsapp contact
+94 71 777 4440

Website
www.lol.lk



Order via
WhatsApp

071 777 4440