



බස්නාහිර පළාත් අධ්‍යාපන දෙපාර්තමේන්තුව
மேல் மாகாணக் கல்வித் திணைக்களம்
Department of Education - Western Province

බස්නාහිර පළාත් අධ්‍යාපන දෙපාර්තමේන්තුව
மேல் மாகாணக் கல்வித் திணைக்களம்
Department of Education - Western Province

බස්නාහිර පළාත් අධ්‍යාපන දෙපාර්තමේන්තුව
மேல் மாகாணக் கல்வித் திணைக்களம்
Department of Education - Western Province

වර්ෂ අවසාන ඇගයීම

ஆண்டிறுதி மதிப்பீடு

- 2019

Year End Evaluation

ශ්‍රේණිය } 08
தரம் }
Grade }

විෂයය }
பாடம் } Western Music
Subject }

පත්‍රය }
வினாத்தாள் } I, II
பaper }

කාලය } 02 hours
காலம் }
Time }

Name :- Index No :-

Underline the most suitable answer

- Which of the following song which describes the beauty of the birds in nature?
(1) රන් විකිරි සිතා (2) සැලළිහිණි කොවුල් (3) මුහුදු රළුල ඔස්සේ (4) ලංකා ලංකා
- Which of the following bird has a sound with an oboe -like quality?
(1) Magpie Robin (2) Common drongo (3) Oriole (4) Shama
- Which of the following Sri lankan drum used in **Sabaragamu Tradition**?
(1) Geta Beraya (2) Yak Beraya (3) Thammattama (4) Daula
- Which of the following Sri Lankan drum is also known as 'Pokuru Beraya'
(1) Geta Beraya (2) Yak Beraya (3) Thammattama (4) Daula
- Which of the following style used during the classical Period?
(1) Monophony (2) Polyphony (3) Homophony (4) Contrapuntal
- Which of the following is a work by the composer who is called as "Child prodigy"?
(1) Fidelio (2) Surprise (3) Creation (4) Magic flute
- Which of the following are the composers of the classical period?
(1) Bach- Handel (2) Haydn-Mozart (3) Bach - Haydn (4) Handel- Haydn
- Which of the following is a composition for three players?
(1) Solo (2) Trio (3) Quartet (4) Quintet
- String family consists of ?
(1) 1 Cello, 2 Violins, Viola (2) Violin, Viola, Cello , Double Bass
(3) Violin, viola, double Bass (4) 2 Violins, Cello, Double Bass
- Which of the following instrument plays the **bass part** of a string quartet?
(1) Violin (2) Viola (3) Cello (4) Double Bass
- String quartet consists of
(1) 1 Cello, 2 Violins, Viola (2) Violin, Viola, Cello , Double Bass
(3) 2 Violins, viola, Cello (4) 2 Violins, Cello, Double Bass
- Spanish Guitar has (1) 4 strings (2) 5 strings (3) 6 Strings (4) 8 Strings

13. Which of the following refers to the same degree in a scale in 3 different ways?

- (1) tonic-fah-Sa (2) Dominant- Doh- Ri (3) Mediant- Me- Ga (4) Subdominant- Ray- Ga



14. The time signature of the following would be

- (1) C (2) 2/4 (3) 3/4 (4) 4/4

15. Which of the following has a key signature of 3 flats?

- (1) D flat major (2) A flat major (3) E flat major (4) B flat major

16. Which of the following is the correct way of writing the key- signature of E major?



- (1) (2) (3) (4)

17. Which of the following is the Tonic Triad of E major?



- (1) (2) (3) (4)

18. Which of the following is not another for 'Ternary Form'?

- (1) Three part form (2) Song form (3) Movement of continuity (4) ABA form

19. Which of the following is not a calypso song?

- (1) Jamaican Farewell (2) Banana Boat Song (3) Let's get together (4) Island in the sun

20. Ternary Form has (i) two sections (ii) three sections (iii) One section (iv) two sections

(2x20= 40 marks)

Part II

Answer 05 Questions. Each question carries 15 marks

01. Look at the following music piece and answer the questions below.




1. In which bars are the following be found
Staccato dotsTied note
2. Crescendo Loud
3. How many phrases are there in the music
4. Fill the time signature
5. Explain the time signature
6. What would be the key of the given piece.....
7. Mention the **circled notes** as (Chromatic Semitone/Diatonic semitone)
8. Explain the brackets at the end
9. Write the time name of the last note.....
10. Name the form of this piece

ii. Write the following melody (1-4) one octave lower in to the Bass clef.




02. Write the following Scales as required.

- i. Write with key signature, the scale of B major descending. Use the G clef.(4 marks)



- ii. Write D major scale ascending in crotchets without key-signatures. F clef (4 marks)




- iii. Put accidentals where necessary to make the following scale of A major.(3 marks)



- iv. Write the enharmonic equivalent of the following (4 marks)



03. i. Name the following key signatures (5 mark each)



ii. Write the following Tonic triads with Key-signature. (5 mark each)



G major A Major B flat major C major F major

iii. Name the following notes. (5 marks)



04.i. Write the following Intervals. (8 marks)



Minor 6th Major 6th Perfect 5th Perfect 4th

ii) Write the Time signature at the correct place (2x2=4 marks)



iii) Fill in the blanks (3 marks)

| Italian Term | English Meaning | Opposite meaning |
|--------------|-----------------|------------------|
| Allegro | | |
| Crescendo | | |

05. Select the compositions below and write them at the relevant place. (7 marks)

The Magic flute , Eroica Symphony ,The Creation ,The Jupiter, Surprise Symphomy

Eine kleine Nachtmusik , Choral Symphony

L.V . Beethoven

F.J Haydn

W.A.Mozart

ii. Name the composer from the given clues. (3 marks)

- A. German Composer, Born in 1770 , a nature lover , known as Shakespeare of music
- B. Austrian Composer, born in 1756 , was a musical prodigy who began composing at the age of five.....
- C. Austrian Composer and Pianist, spend most of his childhood singing in church choirs.....

iii. Name the following instruments. (5 marks)

1. Name two types of guitars (i)..... (ii).....
2. The orchestra is tuned to the instrument
3. Name 2 stringed instruments in the Orchestra 1..... 2.....