



සබ්නාමික පළාත් අධ්‍යාපන දෙපාර්තමේන්තුව මෙය මහජන සේවයේ පවත්වා ගන්නා අංශයකි. Department of Education - Western Province Department of Education - Western Province Department of Education - Western Province	සබ්නාමික පළාත් අධ්‍යාපන දෙපාර්තමේන්තුව මෙය මහජන සේවයේ පවත්වා ගන්නා අංශයකි. Department of Education - Western Province Department of Education - Western Province Department of Education - Western Province
---	---

සබ්නාමික පළාත් අධ්‍යාපන දෙපාර්තමේන්තුව  
මෙය මහජන සේවයේ පවත්වා ගන්නා අංශයකි.  
Department of Education - Western Province

වර්ෂ අවසාන ඇගයීම

ஆண்டிறுதி மதிப்பீடு  
Year End Evaluation

- 2019

ශ්‍රේණිය } 09  
தரம் }  
Grade }

විෂයය }  
பாலம் } Western Music  
Subject }

පත්‍රය }  
வினாத்தாள் } I, II  
பaper }

කාලය } 02 hours  
காலம் }  
Time }

Name :- ..... Index No :- .....


Underline the correct answer

1. Letter name of the following is



- (i) C flat (ii) E flat (iii) E (iv) F

2. The enharmonic equivalent of



- (i) D sharp (ii) E flat (iii) D double sharp (iv) E

3. Which of the following is a **Harmonic Interval**



- (i) (ii) (iii) (iv)

4. Which type of music is associated with a story, scene, poem & idea

- (i) Overture (ii) Programme music (iii) Absolute music (iv) Jazz music

5. The correctly written key signature for A flat major is



- (i) (ii) (iii) (iv)

6. Which of the following is equivalent to



m.c

- (i) Mandra Sapthakaya (ii) Madya Sapthakaya  
(iii) Uchcha Sapthakaya (iv) Achala swara

7. Which of the following is a minor Triad



8. Which of the following is grouped correctly



9. Which of the following would be the Inversion of the given Interval



10. The plan for Rondo Form is (i) A B (ii) ABA (iii) ABACA (iv) ABCD

11. The Piano comprises a key board, action, hammers, Dampers ..... & .....

(i) Strings & Pedals (ii) Hammer & Pedals (iii) Una corda & Right pedal (iv) Keys & felt pad

12. Which of the following is **not** a feature of Romantic period

(i) Virtuoso playing (ii) Programme music (iii) Alberti Bass (iv) Lied

13. Which of the following is the odd one out

(i) Lee keli (ii) Onchili waram (iii) Kala gedi netum (iv) Pel Kavi

14. Which of the following is a false statement

(i) A rest is indicated by + (ii) The high octave is indicated by a dot above a note  
(iii) Flat is equivalent to Komala (iv) Beats are called Vibhaga in Oriental music

15. Which of the following is the highest in pitch from wood wind instrument

(i) Clarinet (ii) Oboe (iii) Piccolo (iv) Flute

16. How many syllables are there for the words 'Jack in a box, can't put up his socks'

(i) 8 (ii) 9 (iii) 10 (iv) 7


17. The pedals on the Left is known as

(i) Soft pedal (ii) Sostenuito pedal (iii) Damper Pedal (iv) Loud Pedal


18. The English meaning of Lento & Largo are

(i) Slow, Fast (ii) Slow, Broad (iii) Plucked, Slow (iv) Soft, Sweet

02.i.Using the key signature ,F sharp Harmonic minor scale one octave ascending in Crotchets . (6 marks)



ii. Write A flat major scale ascending in quavers with accidentals . Use the F clef ( 5 marks)




iii, Write the following Intervals ( 4 marks)



03.i. Put the time signature at the correct place. ( 4 marks)




ii. Write the following Triads without using key signatures (5 marks)



C major ,Tonic	G major , Dominant	F major ,Tonic	C minor, Leading note	D minor Dominant
Second Inversion	First Inversion	Second Inversion	Root position	Root position

iii. Compose a melody of 4 bars in F major in Triple time ( 6 marks)



04. i. Convert the following melody in to Oriental Notation ( 4 marks)



19. The instrument which has **Octave higher** as a transposing Instrument

- (i) Flute                      (ii) Cor Anglais                      (iii) Double Bass                      (iv) Piccolo

20. Which of the following is **not** categorized as a Pop song

- (i) You raise me up   (ii) Yesterday   (iii) Earl King   (iv) I have a dream

## Part II

**Answer 05 questions. Each question carries 15 marks.**

01. Look at the following music & answer the questions below.

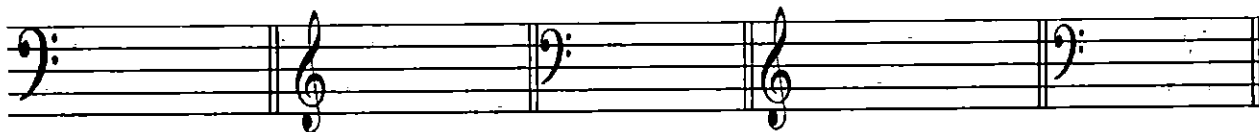
1806 - 1874

- i. Name the key of the piece .....
- ii. Name the relative key of the given piece .....
- iii. The composer of the piece is Johann Burgmüller, Which period he belong .....
- iv. How many Phrases are there in the piece .....
- v. Name the circled note in bar 4 .....
- vi. Describe the bracketed chords A & B (ex IVb) .....
- vii. Explain the following

*f*..... *P*.....

b. Re-write the following melody one octave higher in the Treble clef

ii. Write the key signatures of the following ( 5 marks)



B major

D minor

E flat Major

G minor

F minor

iii. Mark with a Tick as required. ( 1/2x12= 6 marks)

	Clarinet	Cor Anglais	Bassoon	Flute	Piccolo	Oboe
Single reed						
Double reed						
Transposing						
Non Transposing						
No reed						

05.i.Fill the following Grid according to the clues.( 1/2x12= 6 marks)

Composition	Composer	Nationality
i. Military Polonaise		
ii. Album for the young		
iii. Earl King		
iv. Lebestraum		
v. Aida		
vi. 1812 Overture		

ii. Name the composer from the given clues.(4 marks)

A. He had a passionate love for his motherland Poland .....

B. He started a magazine named as ' New journal of music ' .....

C . He composed more than 600 songs , known as the master of Romantic Art song .....

D. Born in Russia , composed many Ballets including 'Swan Lake ' :.....

iii. Describe **one** of the following

**Concerto , Suite, Ballet**