



ඌව පළාත් අධ්‍යාපන දෙපාර්තමේන්තුව
ஊவா மாகாண கல்வித் திணைக்களம்
Uva Provincial Department of Education



PRACTICE TEST - 2021 (2022)

Grade 11

Western Music - I






Time : 1 hour

****Underline the correct answer.**

01. How many demi semi quavers are there in a dotted minim?

- 1) 20 2) 30 3) 24 4) 36

02. The enharmonic equivalent of the given note is


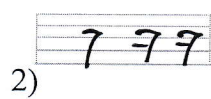



- 1) 2) 3) 4)

03. Which of the following is the upper tetra chord of B major?


- 1) F# G# A# B 2) B C# D# E 3) F# G A B 4) B C D E

04. Which of the following are the suitable rests to complete the given bar?



- 1) 2) 3) 4)

05. Which of the following is an inversion of the given interval?



- 1) Diminished 7th 2) Minor 7th 3) Augmented 7th 4) Diminished 7th

06. Which of the following irregular note group is used for both simple and compound time?

- 1) Sextolet 2) Quintuplet 3) triplet 4) Quadruplet


07. How many semitones are there in a diminished 5th?

- 1) 6 2) 5 3) 7 4) 8

08. A minor triad consist of


- 1) Two major 3rd s one above the other 2) Major 3rd and minor 3rd
3) Two minor 3rd s one above the other 4) minor 3rd and major 3rd

09. Which of the following note has lowest frequency?



- 1) 2) 3) 4)

10. Which of the following would be the chord indication for the given example?



1) **Ib**

2) **IVb**

3) **IC**

4) **IVC**

11. Which of the following is the corresponding compound time for $\frac{4}{2}$?


1) 6
4

2) 9
4

3) 12
4

3) 12
8

12. How would you explain the given cadence?



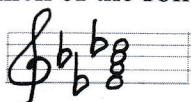
1) Plagal cadence in D major

2) Imperfect cadence in D major


3) Plagal cadence in B minor

4) Imperfect cadence in B minor


13. Which of the following would be the Dominant 7th chord of Ab major?




1)



2)



3)



4)

14. Which of the following are called "Achala swara" ?

1) Ri Ga da Ni

2) Sa Pa

3) M'

4) NI Sa

15. 'Leaning note' is also known as

1) 7th note

2) Appoggiatura

3) Acciaccatura

4) Trill

16. Which of the following is the dominant triad of Bb minor?


1) major

2) minor

3) diminished


4) augmented

17. The correct way of writing the whole tone scale of G is





1)

2)



3)

4)



18. Which of the following is a highest pitch instrument in wood wind family?

1) Flute

2) Double bass


3) Piccolo

4) bassoon

19. The given melody is the written notes in clarinet in Bb. Which of the following would be the sounding

Notes?





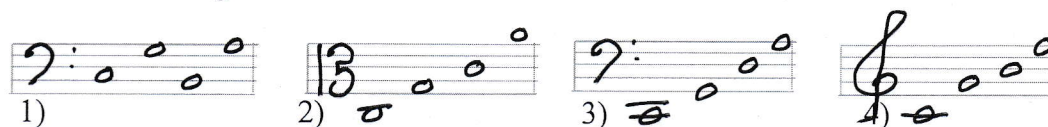
20. Which of the following has a movable slide?

- 1) Tuba 2) Euphonium 3) Trombone 4) Bassoon

21. Which of the following instrument does not have pedals?

- 1) Timpani 2) Glockenspiel 3) Piano 4) Harp

22. What are the tuning notes of cello?



23. Which of the following is not in Rondo form ?

- 1) Humaroscope 2) Fur Elise 3) Country Gardens 4) Harmonious black smith

24. Which of the following is an up country ritual?

- 1) Gam madu 2) Puna madu 3) Gee madu 4) Kadawara kankariya

25. Another name for Ruhunu bera is

- 1) Magul bera 2) yak bera 3) Udarata bera 4) udakkiya

26. Clarinet quintet consists of

- 1) Clarinet, Violin, Viola, Cello, Double bass
2) Clarinet, 2 Violins, Viola, Cello
3) Clarinet, 2 Violins, 2 Violas
4) Clarinet, Oboe, Bassoon, Flute

27. 'Album for the young' was composed by

- 1) Schubert 2) Mendelssohn 3) Schumann 4) Listz

28. Franz Schubert was born in

- 1) 1828 2) 1811 3) 1813 4) 1797

29. Which of the following composer was famous for 'Ballets'?

- 1) Chopin 2) Gershwin 3) Tchaikovsky 4) Ravel

30. Which of the following is the main style of Baroque period?

- 1) Syncopation 2) Blues 3) Polyphonic 4) Alberti bass

31. Which of the following contains similar meanings?

- 1) Decrescendo/Crescendo
- 2) Rallantando/ Accelerando
- 3) Rallantando/ Ritardando
- 4) Pianissimo/ Fortissimo

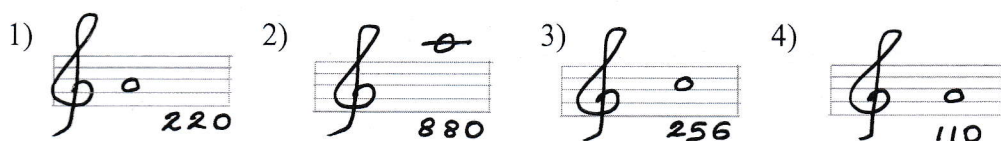
32. Which of the following song has the words of 'Until you come and sit a while with me'?

- 1) Yesterday
- 2) You raise me u
- 3) Any dream will do
- 4) Country roads

33. The 3rd movement of symphony would be

- 1) Allegro
- 2) Slow
- 3) Minuet and Trio
- 4) Cadenza

34. Which of the following is the correct frequency of the given note?



35. Which of the following is a NOT a characteristic of a musical sound?

- 1) Timbre
- 2) Intensity
- 3) Pitch
- 3) Source

36. The false statement related to the sequencer is

- 1) Sequencers do not show the music as actual notation on the screen
- 2) Modern sequencers are usually computer programmes?
- 3) The sequencer can record, edit and replay music
- 4) Many tracks of music can be played back at the same time

37. Which of the following is not based on the programme music?

- 1) Carnival of animals
- b) 1812 overture
- c) William Tell Overture
- d) Bolero

38. the main drum used for Nadagam is

- 1) Mrudangam
- b) Maddalaya
- c) Udekkiya
- d) Ath rabana

39. Which of the following is based on a biblical story?

- 1) Opera
- b) Concerto
- c) Oratorio
- d) Overture

40. The voice between Soprano and Alto would be

- 1) Tenor
- b) High soprano
- c) Mezzo soprano
- d) Baritone



උව පළාත් අධ්‍යාපන දෙපාර්තමේන්තුව
ஊவா மாகாண கல்வித் திணைக்களம்
Uva Provincial Department of Education



PRACTICE TEST - 2021 (2022)

Grade 11

Western Music - II

Time : 2 hour

****Answer Question one which is compulsory and 04 others, selecting two from each part A and B**

01. Study the given passage and answer the following questions

Hallelujah Chorus

G.F. Handel

Moderato

-
-

5) Circle a dominant triad written as melodic intervals (1 marks)

7) Fill the 9th bar with rest or rests correctly grouped. (1 mark)

8) Re write the 1st bar of the treble part , same pitch in alto clef (2 marks)





9) Name the nationality of the composer. (1mark)

10) Add a pause to the last beat of the piece. (1 mark)

02. Write the following scales.


Fill in the last bar with rest or rests if necessary. (3 marks)






d) Name the inversions of the given intervals.

(3 marks)



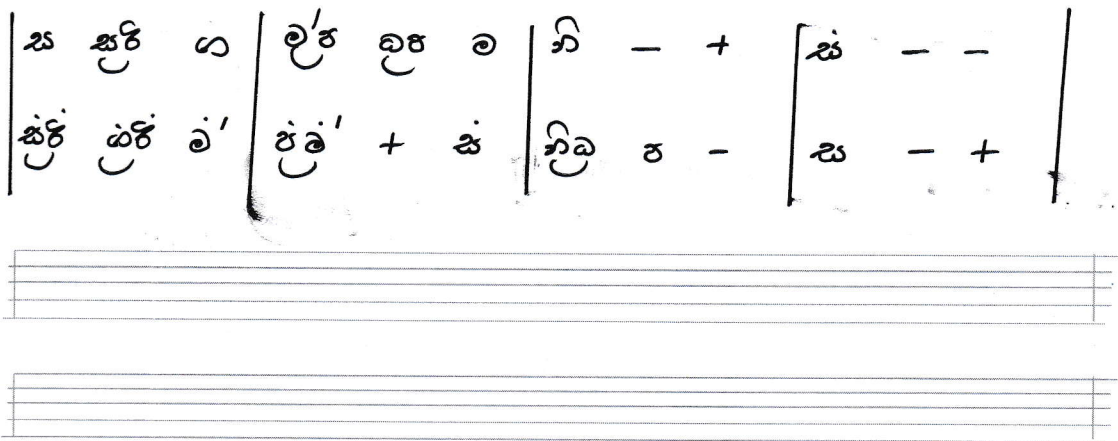
03. a) Fill in the blanks with rest or rests correctly grouped.

(8 marks)




b) Convert the following passage in to western notation

(4 marks)




04. a) Transpose the given passage a minor 6th lower in to the bass clef.

(6 marks)




b) Adding an answering phrase to the given melody. Add Phrasing, tempo and dynamics.

(6 marks)



Part B

05. a) Write the following cadences. Use the dominant 7th chord where necessary. Insert the chord indications (8 marks)



Perfect cadence

G minor

Plagal cadence

A major


Imperfect cadence

E^b major

Interrupted cadence

F[#] minor

b) Write the bass notes of the given triads and complete the given passage. (4 marks)



06. a) Complete the following table as required.

(8 marks)

Composer	Nationality	Date of birth	Work
		1770	
	Hungarian		Libestrium
Prokofiev			

b) Write 4 Maintenance tips of brass wind instruments . (4 marks)

.....

.....

.....



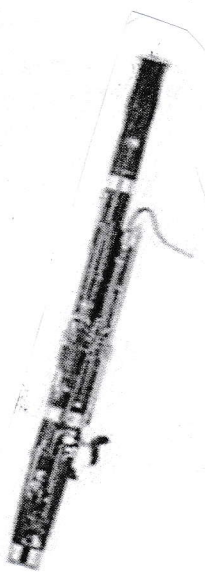
.....

.....

.....

.....

07. a) Name the following instruments. And write a brief description about any of them. (4 marks)



.....(4 marks)

b) Name two musicals with two songs

(4 Marks)



LOL.Lk
Learn Ordinary Level

විභාග ඉලක්ක පහසුවෙන් ජයගන්න පසුගිය විභාග ප්‍රශ්න පත්‍ර



- Past Papers
 - Model Papers
 - Resource Books
- for G.C.E O/L and A/L Exams



විභාග ඉලක්ක ජයගන්න
Knowledge Bank



Master Guide

WWW.LOL.LK



**CASH
ON**

DELIVERY



Whatsapp contact
+94 71 777 4440

Website
www.lol.lk



**Order via
WhatsApp**

071 777 4440